

Section C: Practice Problems

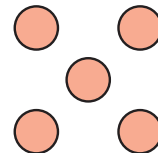
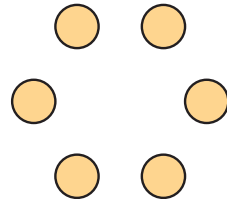
1. Draw a line from each number to the group of dots it matches.

5

6

4

7



(From Unit 2, Lesson 13.)

2. Here is the number 6.

6

Count out 6 counters.

You can use a 5-frame if you want.

--	--	--	--	--

(From Unit 2, Lesson 14.)

3. Here is the number 8.



Draw a picture showing 8 things.

(From Unit 2, Lesson 15.)

4. What is a “how many” question you can ask about this picture?



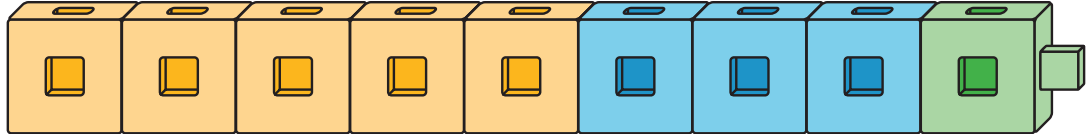
Write a number to answer your question.

(From Unit 2, Lesson 16.)

5. Exploration

Make a shape with two handfuls of pattern blocks.
Ask a “how many” question about your shape.
Trade questions with a partner and answer your partner’s question.

6. Exploration



Han says he sees 5.
Lin says she sees 4.
Tyler says he sees 3.

Explain or show how Han, Lin, and Tyler can all be correct.

