

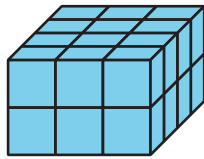
Lesson 3: Volumes of Prism Drawings

Cool Down: Jada's Prism


Jada's prism has 4 layers and each layer has 9 cubes.

1. Circle the prism that is Jada's.

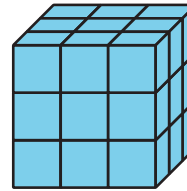
A



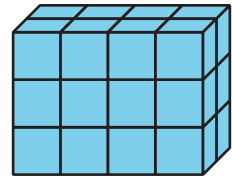
B



C



D



2. Find the volume of Jada's prism. Explain or show your reasoning.