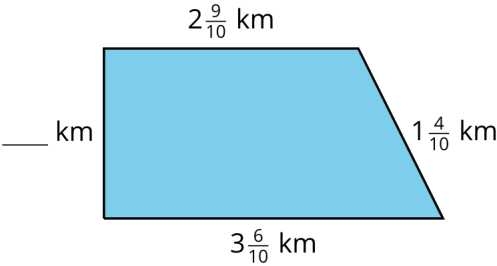


Missing Measurements - Small

Missing Measurements

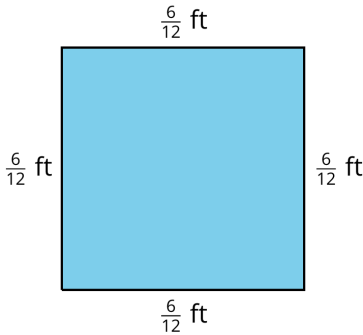
A



Perimeter = 9 km

Missing Measurements

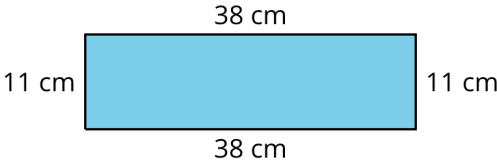
B



Perimeter = _____

Missing Measurements

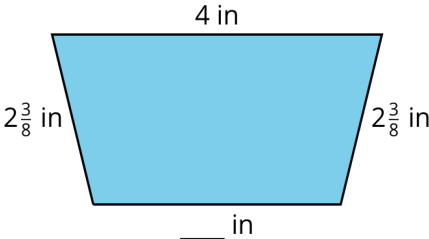
C



Perimeter = _____

Missing Measurements

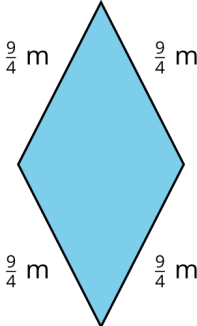
D



Perimeter = 12 in

Missing Measurements

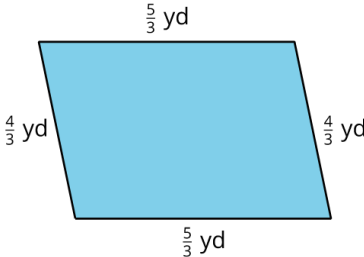
E



Perimeter = _____

Missing Measurements

F



Perimeter = _____