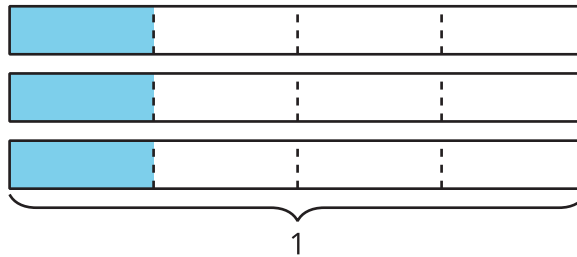


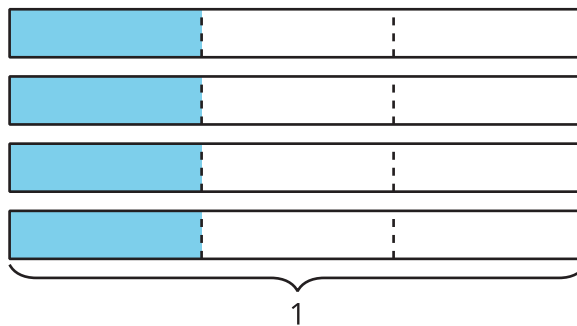
# Extending Operations to Fractions: Section A Checkpoint

1. Select all diagrams that show  $4 \times \frac{1}{3}$ .

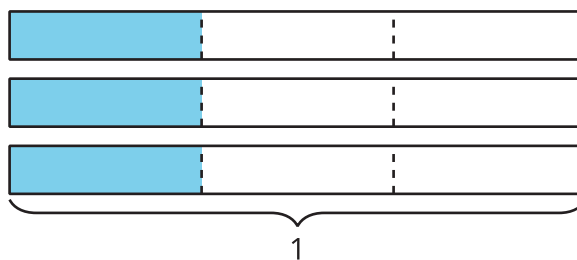
A.



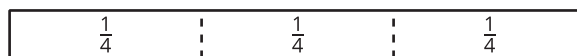
B.




C.



D.



E.



2. Select **all** the expressions that are equivalent to  $\frac{8}{5}$ .

A.  $5 \times \frac{1}{8}$

B.  $8 \times \frac{1}{5}$

C.  $2 \times \frac{4}{5}$

D.  $4 \times \frac{2}{5}$

E.  $2 \times \frac{6}{5}$

3. a. Draw a diagram showing  $4 \times \frac{2}{3}$ .

b. Use the diagram to calculate  $4 \times \frac{2}{3}$ .