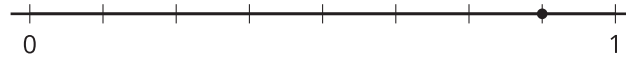


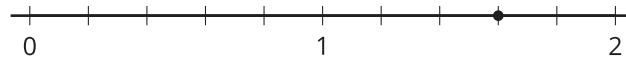
Fraction Equivalence and Comparison: Section A Checkpoint

1. Label the point on each number line with a fraction it represents.

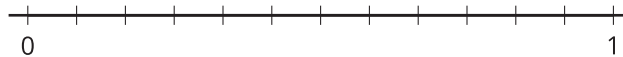
a.



b.



2. Is $\frac{7}{12}$ greater than or less than $\frac{1}{2}$? Explain your reasoning. Use the number line if it is helpful.



3. Explain why $\frac{4}{12}$ is equivalent to $\frac{1}{3}$. Use the number line if it is helpful.

