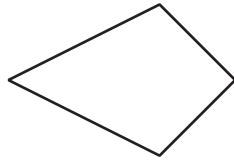


# Lesson 4: Attributes of Rectangles, Rhombuses, and Squares

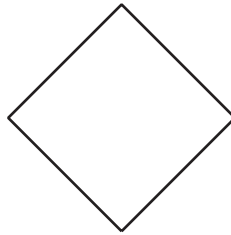
## Cool Down: Find the Rhombuses

Select **all** of the quadrilaterals that are rhombuses. Explain your reasoning.

A



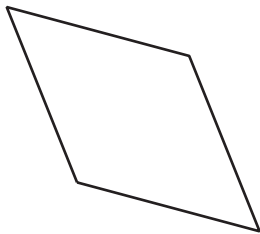
B



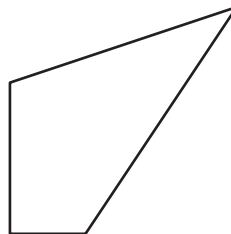
C



D



E




---

---

---

---