

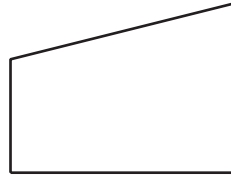
Lesson 3: Attributes that Define Shapes

Cool Down: Mystery Shape

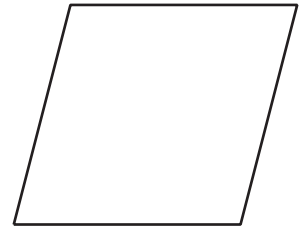
1. Which quadrilateral is being described?

- Hint 1: It has 4 sides.
- Hint 2: All of its sides are the same length.
- Hint 3: It has no right angles.


A



B



C



D



2. Which hints do you need to guess the quadrilateral? Explain your reasoning.
