

Measuring Length, Time, Liquid Volume, and Weight: Section B Checkpoint

1. Which fruit weighs about 1 kilogram?

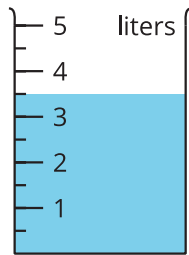
- A. one blueberry
- B. one pineapple
- C. one grape
- D. one raspberry

2. Select 2 items that weigh about 1 gram.

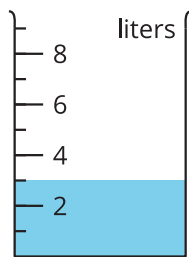
- A. a piece of gum
- B. a notebook
- C. a door key
- D. a pen cap
- E. a toothbrush

3. Select **all** the containers that show $3\frac{1}{2}$ liters of water.

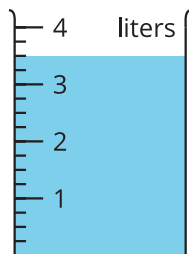
A.



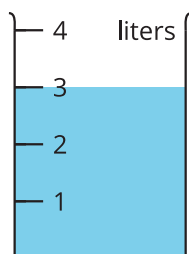
B.



C.



D.



E.

