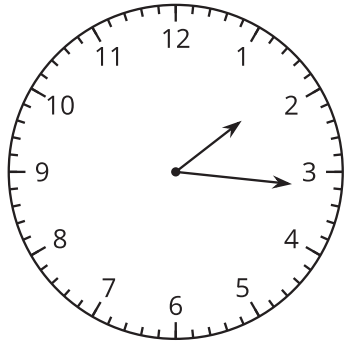
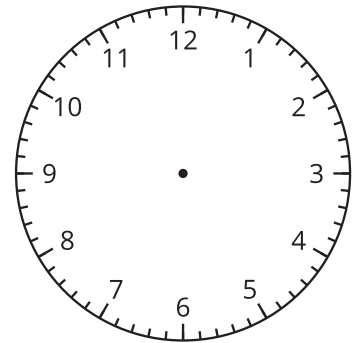


Section C: Practice Problems

1. a. Han drew this clock and says it shows 2:16 p.m. Do you agree with Han?
Explain your reasoning.



- b. Draw the hands on this clock to show 5:55 p.m.



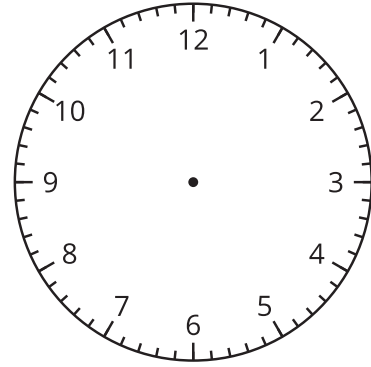
(From Unit 6, Lesson 9.)

2. Mai left to walk the dog at 6:50 a.m. and she returned at 7:44 a.m. How much time did Mai spend walking the dog?

(From Unit 6, Lesson 10.)

3. Andre started soccer practice at 3:45 p.m. He left school 75 minutes earlier.

- Show the time Andre left school on the clock.
- Andre was at soccer practice for 110 minutes. What time did soccer practice end? Explain or show your reasoning.



(From Unit 6, Lesson 11.)

4. Exploration

- What time do you usually go to bed at night?
- What time do you usually get up in the morning?
- How many minutes do you spend in bed? Explain or show your reasoning.

5. Exploration

Priya drew this clockface to show 3:15.

Do you think Priya's clock face is accurate? Explain or show your reasoning.

