

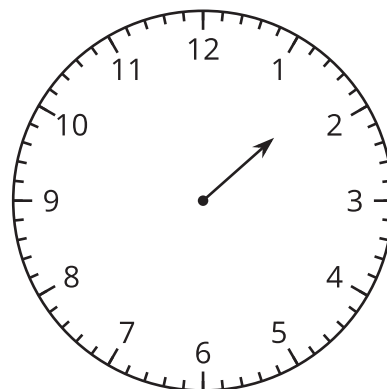
Lesson 9: Time to the Nearest Minute

- Let's tell and write time to the nearest minute.

Warm-up: Estimation Exploration: On the One Hand

This clock only has an hour hand.

What time could it be?



Record an estimate that is:

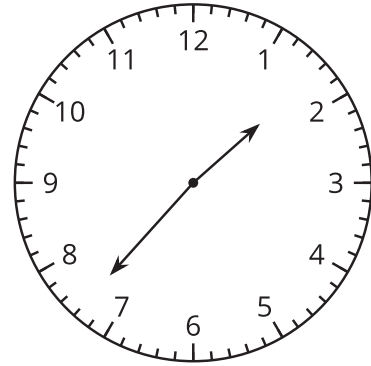
| too early | about right | too late |
|-----------|-------------|----------|
| | | |

9.1: Just a Clock on the Wall

1. Lin says the time shown on the clock is 1:37 p.m.

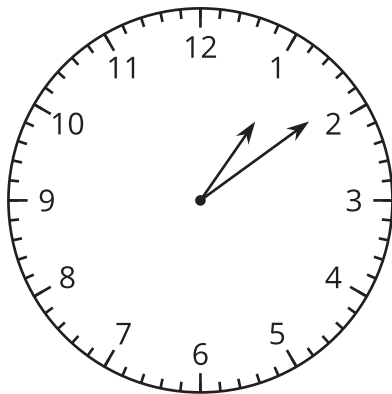
Diego says the time is 1:35 p.m.

Who do you agree with? Explain or show your reasoning.

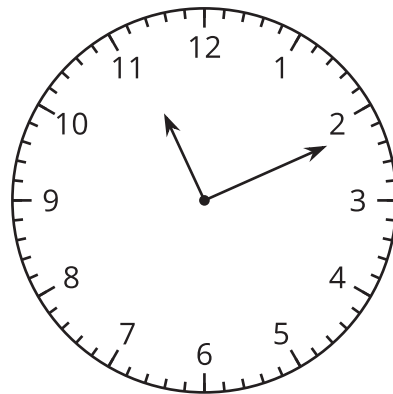


2. What time is shown on each clock?

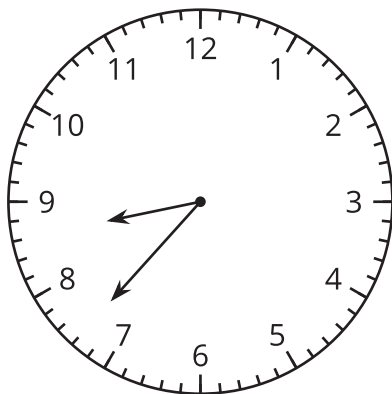
A



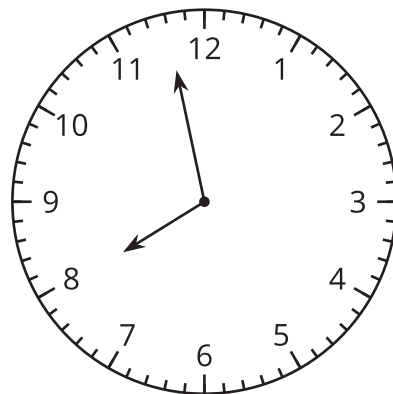
B



C



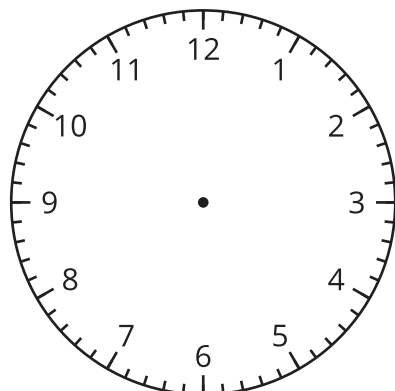
D



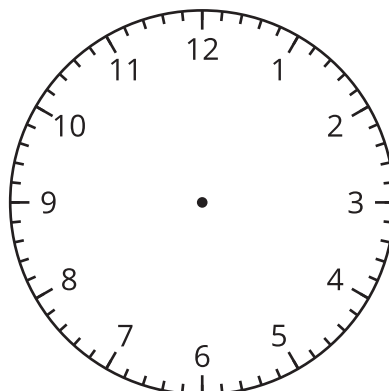
9.2: Show Time

1. Show the time given on each clock.

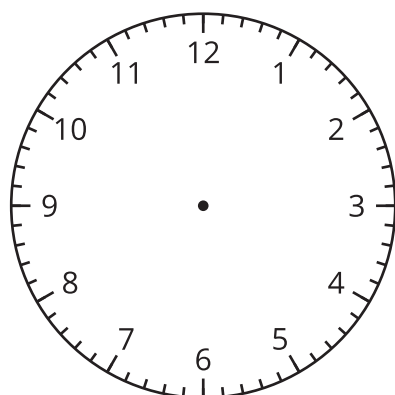
A 2:36 PM



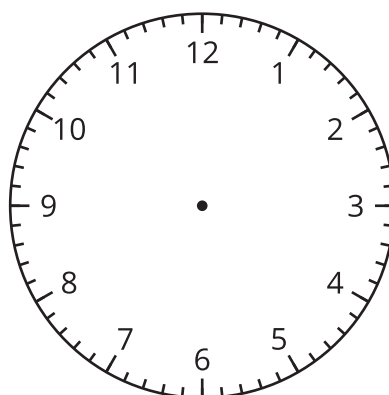
B 3:18 PM



C 12:17 PM



D 9:02 PM



2. Draw a time on this clock. Trade with a partner and tell the time on their clock.

