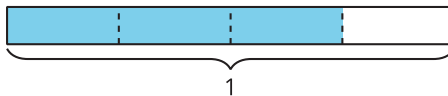


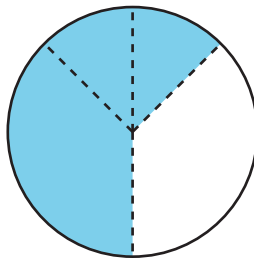
Fractions as Numbers: Section A Checkpoint

1. Select **all** diagrams where $\frac{3}{4}$ of the whole rectangle or circle is shaded.

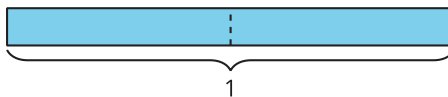
A.



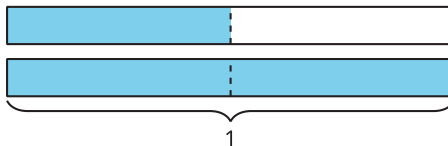
B.



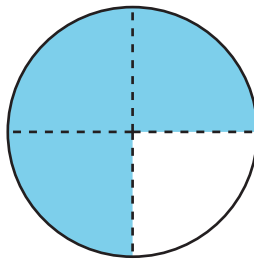
C.



D.



E.



2. Shade $\frac{5}{6}$ of the rectangle.

