


Lesson 6: Locate Unit Fractions on the Number Line

- Let's partition the number line to locate unit fractions.


Warm-up: Which One Doesn't Belong: Fraction Details

Which one doesn't belong?


A



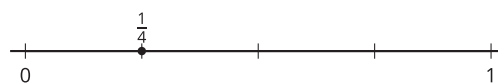
B



C



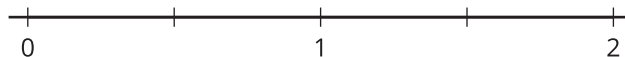
D



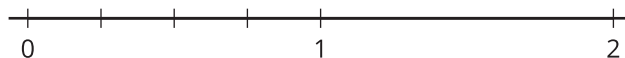
6.1: Partition Fourths

Three students are partitioning a number line into fourths. Their work is shown.

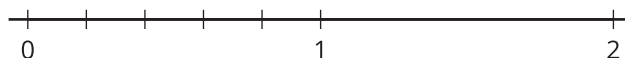
Clare's number line:



Andre's number line:



Diego's number line:



Whose partitioning makes the most sense to you? Explain your reasoning.



6.2: Unit Fractions on the Number Line

Partition each number line. Locate and label each fraction.

