

Lesson 7: Subtract Your Way

- Let's subtract numbers within 1,000.

Warm-up: Number Talk: Subtract Two-Digit Numbers

Find the value of each expression mentally.

- $50 - 10$
- $58 - 10$
- $258 - 20$
- $258 - 24$

7.1: Strategies to Subtract

Find the value of each difference in any way that makes sense to you. Explain or show your reasoning.

1. $428 - 213$

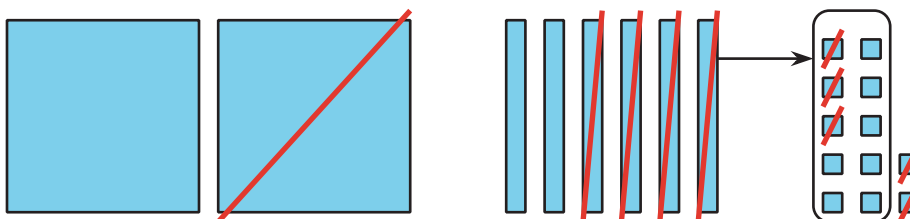
2. $505 - 398$

3. $394 - 127$

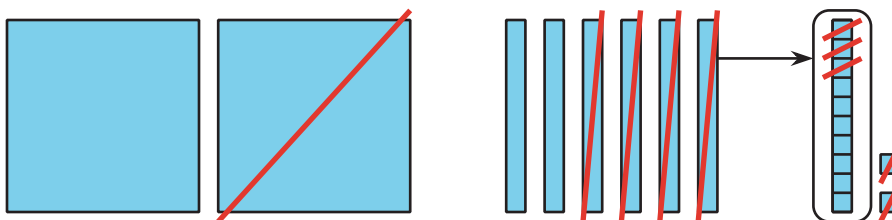
7.2: Base-ten Drawings

- Jada and Han made drawings to show how they used base-ten blocks to find the value of $262 - 135$. Their drawings are shown.

Jada's drawing



Han's drawing



How are their drawings alike? How are they different?

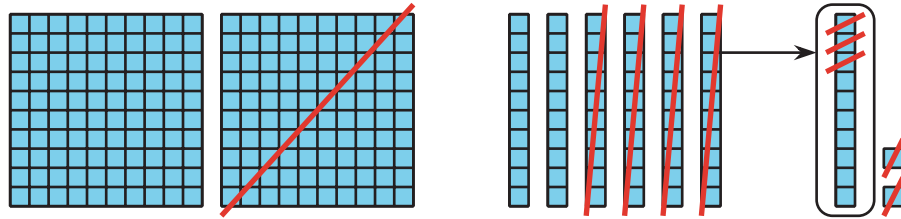
2. Here are three expressions, followed by three diagrams. Write each expression next to the diagram that represents it. Then, find the value of the expression.

$$252 - 181$$

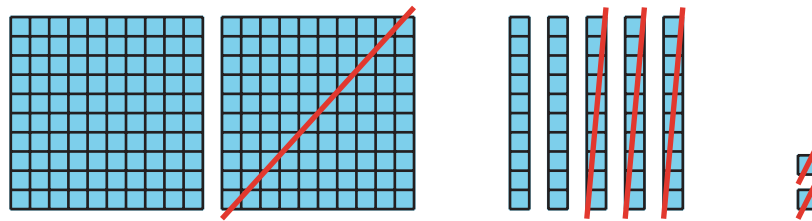
$$262 - 135$$

$$252 - 132$$

a.



b.



c.

