

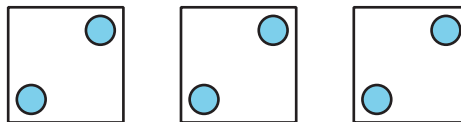
Introducing Multiplication: Section B Checkpoint

1. Jada has 2 bowls. Each bowl has 3 apples. Select **all** representations of Jada's apples.

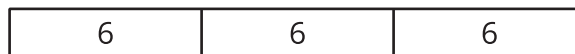
A.



B.



C.



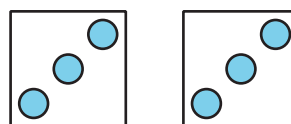
D.

$$2 \times 3$$

E.

$$2 + 3$$

F.



2. a. There are 4 bunches of grapes. Each bunch has 10 grapes. How many grapes are there? Explain or show your reasoning.
- b. There are 30 people in some cars. Each car has 5 people in it. How many cars are there? Explain or show your reasoning.