

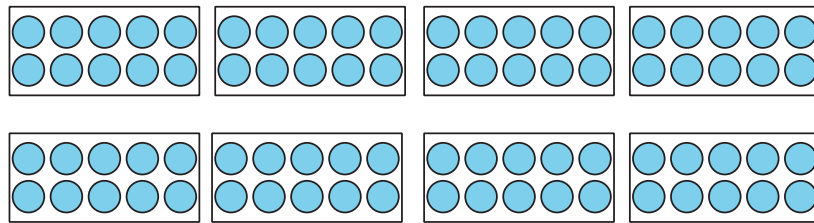
Lesson 13: Multiplication Equations

Cool Down: Match the Equation

Select all the drawings, diagrams, and situations that could represent the equation.

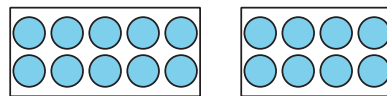
$$80 = 8 \times 10$$

A.

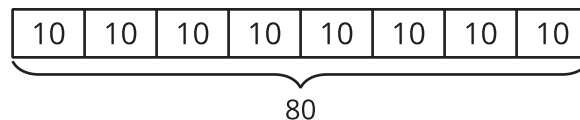


B. Andre has 8 boxes. Each box has 10 cars in it. He has 80 cars altogether.

C.



D.



E. Andre had 8 boxes. Then, he found 10 more boxes. How many boxes does Andre have?

F.

