

Assessment : Section C Checkpoint

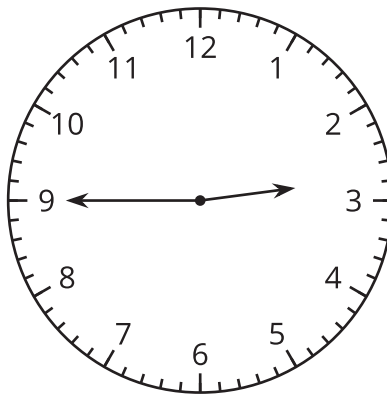
Problem 1

Goals Assessed

- Tell and write time from analog and digital clocks to the nearest five minutes, using a.m. and p.m.

Statement

Select **2** times that represent the time on the clock.



- A. 3:45
- B. Quarter till 3
- C. Quarter past 2
- D. 2:45
- E. Quarter till 2

Solution

["B", "D"]

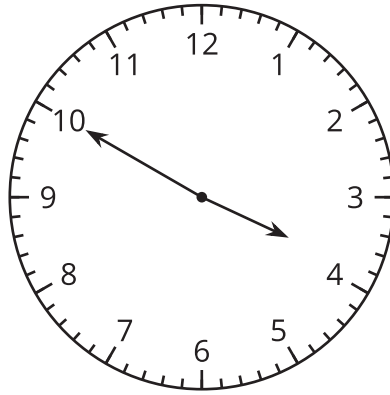
Problem 2

Goals Assessed

- Tell and write time from analog and digital clocks to the nearest five minutes, using a.m. and p.m.

Statement

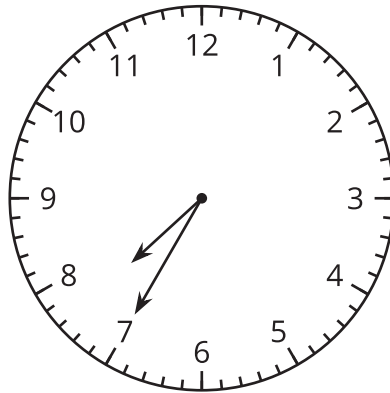
1. The clock shows when Jada leaves school one day to come home. Write the time and circle a.m. or p.m.



	•	
—	•	—

a.m. or p.m.

2. The clock shows when Andre brushes his teeth after breakfast. Write the time and circle a.m. or p.m.



	•	
—	•	—

a.m. or p.m.

Solution

- 1. 3:50 p.m.
- 2. 7:35 a.m.