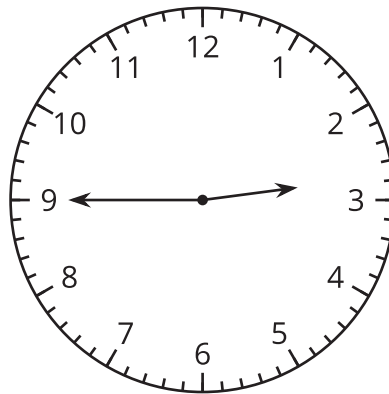


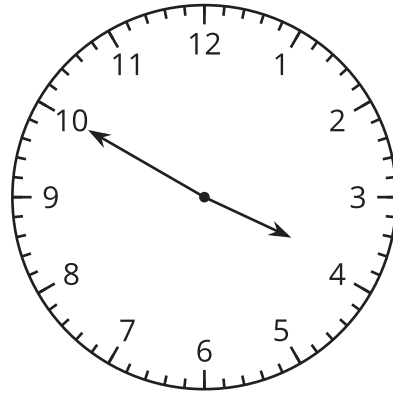
Geometry, Time, and Money: Section C Checkpoint

1. Select 2 times that represent the time on the clock.



- A. 3:45
- B. Quarter till 3
- C. Quarter past 2
- D. 2:45
- E. Quarter till 2

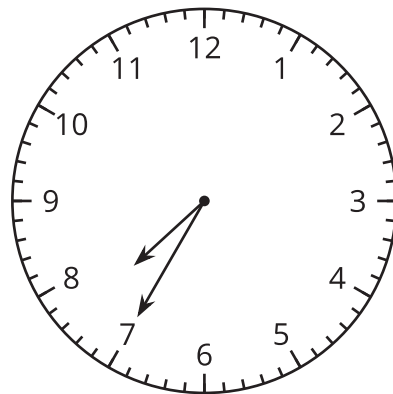
2. a. The clock shows when Jada leaves school one day to come home. Write the time and circle a.m. or p.m.



_____ : _____

a.m. or p.m.

- b. The clock shows when Andre brushes his teeth after breakfast. Write the time and circle a.m. or p.m.



_____ : _____

a.m. or p.m.