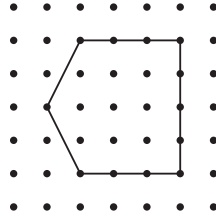


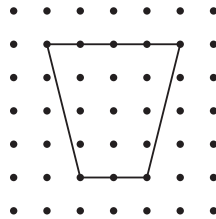
# Geometry, Time, and Money: Section A Checkpoint

1. Select 2 pentagons.

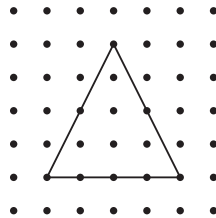
A.



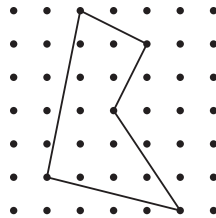
B.



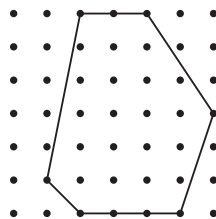
C.



D.



E.



2. Draw a triangle that has 1 square corner and 2 sides that have the same length.

