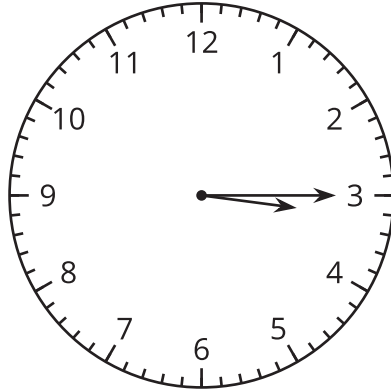
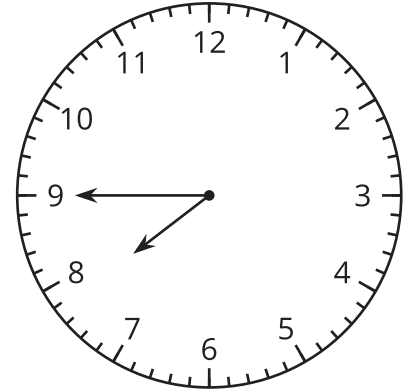


## Section C: Practice Problems

1. a. Write the time shown on the clocks using the words half past, quarter past, or quarter till.

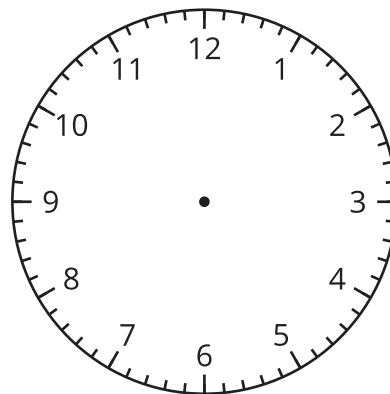


\_\_\_\_\_

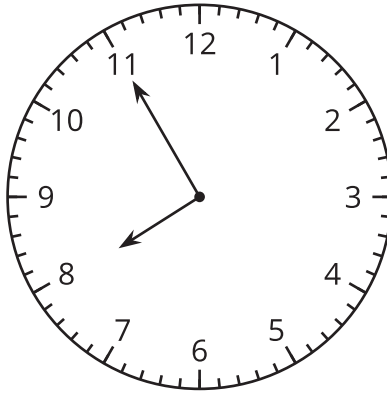


\_\_\_\_\_

- b. Draw hands on the clock face to show half past 5.



(From Unit 6, Lesson 11.)



2. Priya says that the clock shows that it's 7:11. Do you agree with Priya? Explain your reasoning.

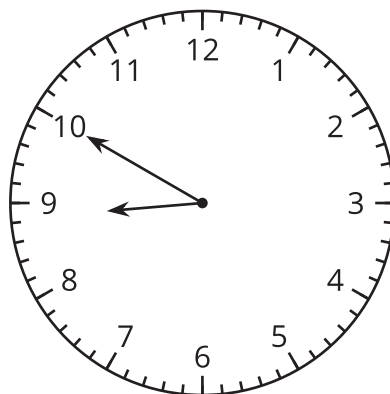
---

---

---

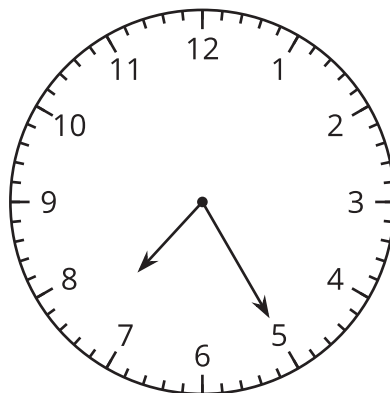
(From Unit 6, Lesson 12.)

3. a.



The clock shows when Clare went to bed. Write the time, including a.m. or p.m. \_\_\_\_\_

b.



The clock shows when Noah got to school. Write the time, including a.m. or p.m. \_\_\_\_\_

(From Unit 6, Lesson 13.)

#### 4. Exploration

Mai got to school at 7:35 a.m. She left school to go home 375 minutes later. What time did Mai leave to go home? Explain your reasoning.

---

---

---

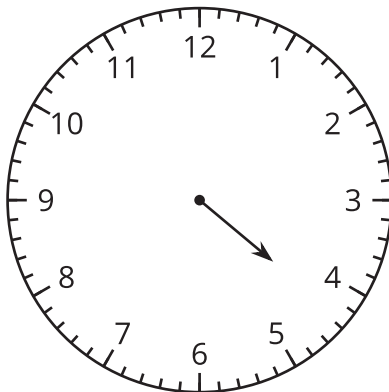
## 5. Exploration

Fill out the table with some of the things you do during the day and the time for each activity.

activity	time
wake up	
leave for school	

## 6. Exploration

This clock only has an hour hand.



What can you say about the time shown on the clock?

---

---

---