

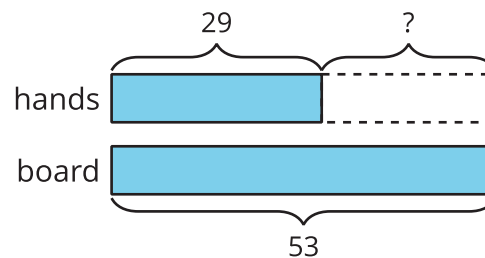
Lesson 12: Story Problems and Diagrams

Cool Down: Find the Match

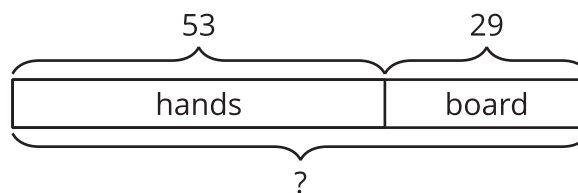
Mai is playing a game with seeds. She has some seeds in her hands and she placed 29 seeds on the game board. She has 53 seeds altogether. How many seeds are in Mai's hands?

1. Circle the diagram that best matches the story problem.

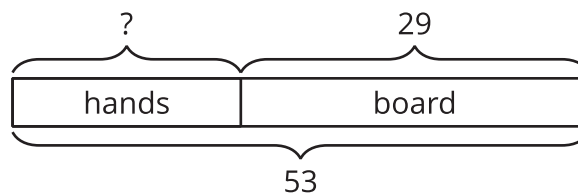
A.



B.



C.



2. Explain your choice.