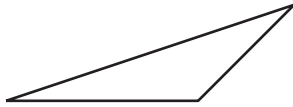


Geometry and Time: End-of-Unit Assessment

1. Circle the 3 shapes that are triangles.

A



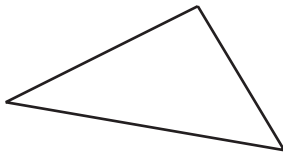
B



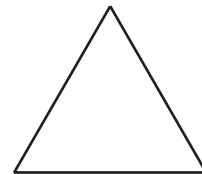
C




D



E



2.




a. Draw a square. Label it with an S.


b. Draw a rectangle. Label it with an R.

c. Draw a triangle. Label it with a T.

3. a. Shade a half of the circle.




b. Shade a quarter of the square.

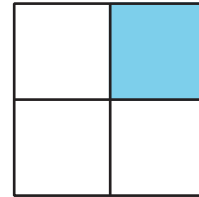


4. Diego says that the same amount of each square is shaded because one piece of each square is shaded.

A



B



Do you agree with Diego?

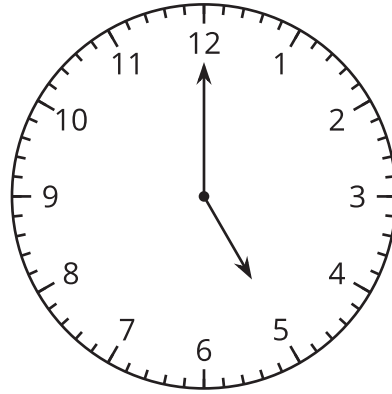
Show your thinking using drawings, numbers, or words.

5. Circle the 2 clocks that show 5 o'clock.

A

5:55

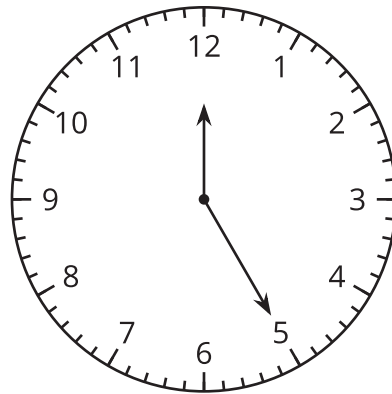
B



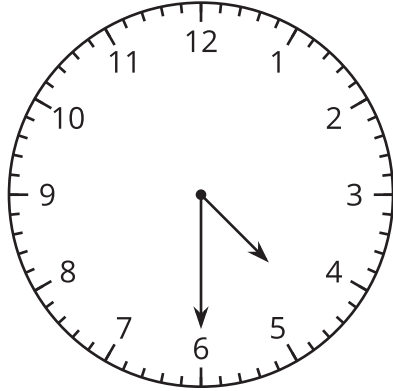
C

5:00

D



6. a. What time is shown on the clock?



:

b. Draw the clock hands to show the time.

8:00

