

Section C: Practice Problems

1. a. Which number is greater, 54 or 36?
Show your thinking using drawings, numbers, or words.

- b. Which number is less, 25 or 52?
Show your thinking using drawings, numbers, or words.

(From Unit 4, Lesson 14.)

2. Decide if each statement is true or false.

Show your thinking using drawings, numbers, or words.

a. $35 < 29$

b. $72 = 27$

c. $81 > 77$

(From Unit 4, Lesson 15.)

3. Write $<$, $>$, or $=$ in each blank to make the statement true.

a. 47 _____ 43

b. 73 _____ 63

c. 85 _____ 85

d. 9 _____ 96

(From Unit 4, Lesson 16.)

4. Order the numbers from least to greatest:

73 16 84 9 87 75 33


(From Unit 4, Lesson 17.)

5. Exploration


Noah says that there are more connecting cubes in B because it has more tens than A. Do you agree with Noah?

Show your thinking using drawings, numbers, or words.

A





B



6. Exploration

Andre correctly solved this problem, but his brother spilled water on some numbers.

Circle the numbers that are
greater than  but less than .

Andre circled  89  82  77 24 19  68

What numbers might be hidden from view?
Show your thinking using drawings, numbers, or words.