

Georgia
CRCT
online



2nd Grade Math Practice Test

Second Grade Mathematics
Test

Suzy Skelton

Name: _____

Date: _____

Instructions:

Bubble in the correct answer.

Name: _____

Test: 2nd Grade Math Practice Test

Date: _____

Teacher: Suzy Skelton

1. Which symbol belongs in the circle to make the sentence true?

$$12 - 2 \bigcirc 10$$

- A. >
 - B. <
 - C. =
-

Look at the number sentence below.

$$17 \bigcirc 9 = 8$$

2. Which symbol goes in the \bigcirc ?

- A. \times
 - B. $+$
 - C. $-$
-

Name: _____

Test: 2nd Grade Math Practice Test

Date: _____

Teacher: Suzy Skelton

Look at the coins below.



3. Which group of coins is worth the same as the coins above?



4. In 742, the digit 4 stands for

- A. 4 ones.
 - B. 4 tens.
 - C. 4 hundreds.
-

5. Andy received 8 letters. Four of the letters were from his pen pals. How many letters were not from pen pals?

- A. 4
 - B. 6
 - C. 12
-

Name: _____

Test: 2nd Grade Math Practice Test

Date: _____

Teacher: Suzy Skelton

6. Tyrone started building a model plane at 3:00. He worked on the plane for 2 hours and 30 minutes. What time did he finish?

- A. 6:20
 - B. 5:30
 - C. 6:30
-

7. Maria had 7 gold rocks. She looked for more, but could not find any. How many rocks did she have all together?

- A. 7
 - B. 9
 - C. 0
-

8. Terry had 19 marbles. Jim gave him 23 more.

About how many marbles did Terry have then?

- A. 30
 - B. 40
 - C. 50
-

9. Which number is one more than 500?

- A. 501
 - B. 510
 - C. 555
-

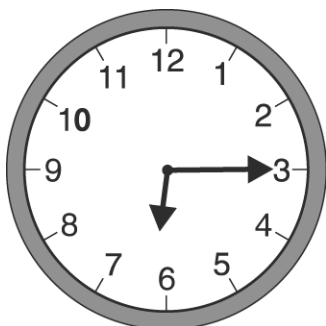
Name: _____

Test: 2nd Grade Math Practice Test

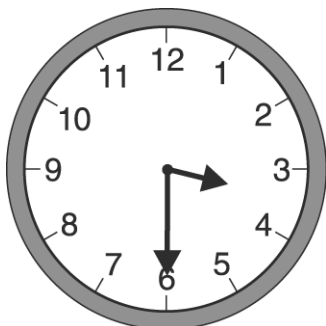
Date: _____

Teacher: Suzy Skelton


10. Which clock shows 6:15?



A.



B.



C.

11. Subtract.

$$\begin{array}{r} 352 \\ - 21 \\ \hline \end{array}$$

A. 331

B. 333

C. 373


Name: _____

Test: 2nd Grade Math Practice Test

Date: _____

Teacher: Suzy Skelton

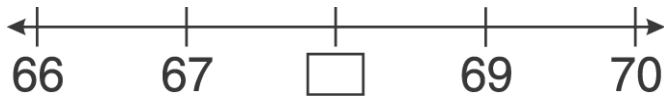
12. Look at the clock below.



What time will it be in 30 minutes?

- A. 8:00
 - B. 8:30
 - C. 9:00
-

13. Look at the number line below.



Which number belongs in the box?

- A. 71
 - B. 68
 - C. 65
-

Name: _____

Test: 2nd Grade Math Practice Test

Date: _____

Teacher: Suzy Skelton

14. Subtract.

$$\begin{array}{r} 935 \\ - 602 \\ \hline \end{array}$$

- A. 333
 - B. 307
 - C. 303
-

15. Subtract.

$$\begin{array}{r} 485 \\ - 72 \\ \hline \end{array}$$

- A. 313
 - B. 413
 - C. 457
-

16. Which number is the same as 3 hundreds, 4 tens, and 2 ones?

- A. 243
 - B. 324
 - C. 342
-


Name: _____

Test: 2nd Grade Math Practice Test

Date: _____

Teacher: Suzy Skelton

17. Carol divided all her crayons into 5 groups with 4 crayons in each group.



How many crayons did she have in all?

- A. 9
- B. 16
- C. 20

18. Dora brought 4 books to school. Sam brought 2 books to school. How many books did Dora and Sam bring to school together?

- A. 2
 - B. 5
 - C. 6
-

Name: _____

Test: 2nd Grade Math Practice Test


Date: _____

Teacher: Suzy Skelton

19. Which number has a 4 in the tens place and a 5 in the ones place?

- A. 245
 - B. 425
 - C. 542
-

Look at the number line below.



20. Which is 86 closer to?

- A. 70
 - B. 80
 - C. 90
-

21. Which number comes next?

709, 710, —

- A. 711
 - B. 719
 - C. 799
-

Name: _____

Test: 2nd Grade Math Practice Test

Date: _____

Teacher: Suzy Skelton

22. Jon left for school at 8:15.

It took him $\frac{1}{2}$ hour to get there.

What time did John get to school?

- A. 8:30
 - B. 8:45
 - C. 9:00
-

23. Which of these numbers has a 4 in the tens place?

- A. 456
 - B. 564
 - C. 645
-

24. Bill has 11 marbles. He gives 3 to Jim. Bill then gets 2 more marbles. Which number sentence could be used to show how many marbles Bill has now?

- A. $11 + 3 - 2 = \square$
 - B. $11 - 3 + 2 = \square$
 - C. $11 - 3 - 2 = \square$
-

25. Teresa had 16 marbles in a bag. She lost 5 marbles. How many marbles were left?

- A. 11 marbles
 - B. 16 marbles
 - C. 21 marbles
-


Name: _____

Test: 2nd Grade Math Practice Test

Date: _____

Teacher: Suzy Skelton

Look at the picture of cows below.



26. How many legs do the 3 cows have in all?

- A. 8
 - B. 10
 - C. 12
-

27. Which number has the same digit in the hundreds and ones places?

- A. 331
 - B. 202
 - C. 144
-

28. Look at the number pattern below.

3 6 9 12

Which number comes next?

- A. 15
 - B. 16
 - C. 18
-

Name: _____

Test: 2nd Grade Math Practice Test

Date: _____

Teacher: Suzy Skelton

Look at Ms. Chen next to the totem pole.



29. If Ms. Chen is 5 feet tall, about how tall is the totem pole?

- A. 8 feet
 - B. 30 feet
 - C. 15 feet
-

Name: _____

Test: 2nd Grade Math Practice Test

Date: _____

Teacher: Suzy Skelton

30. How much money is shown in the picture?



- A. 48¢
 - B. 43¢
 - C. 38¢
-