

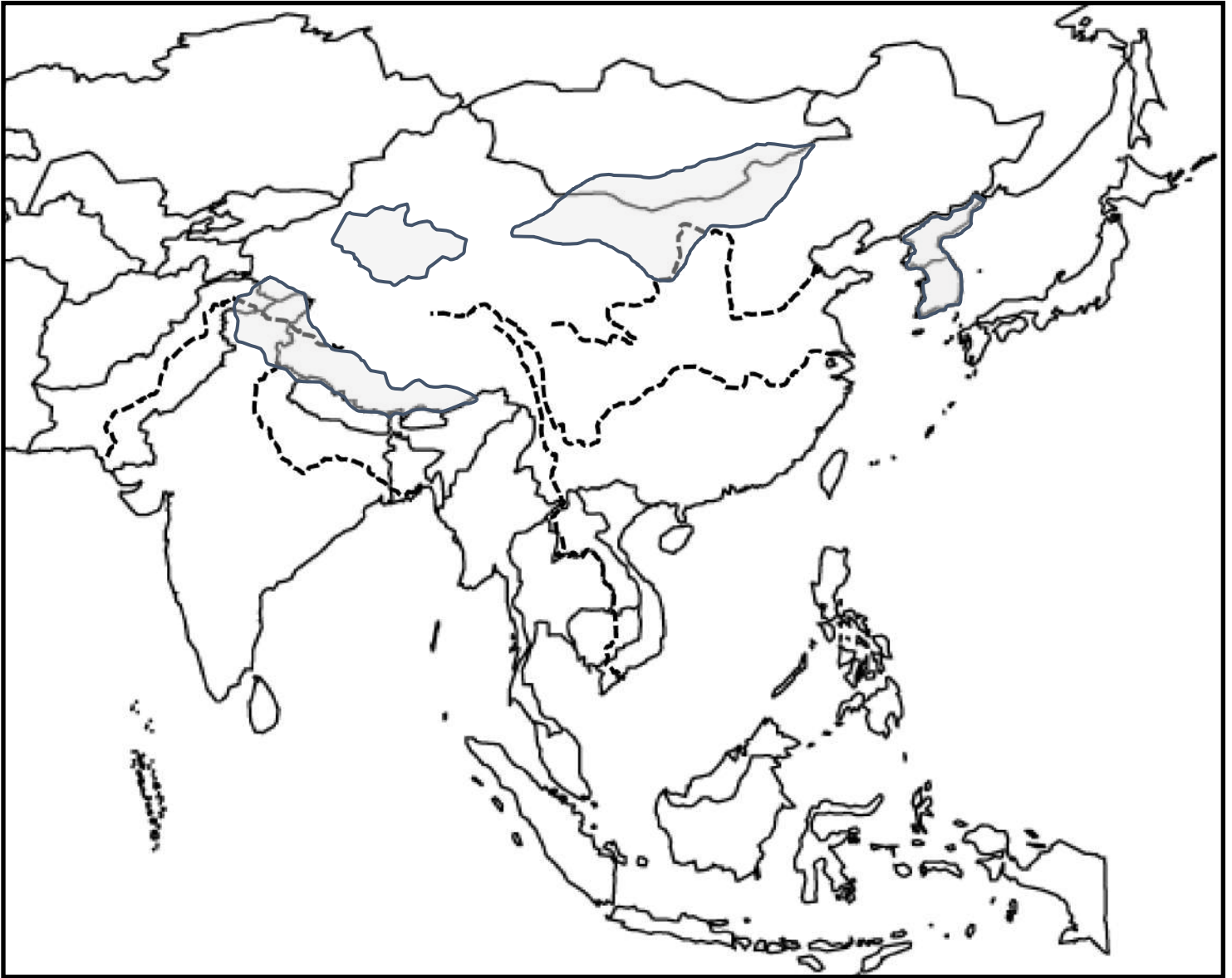
Name: _____

Date: _____ Period: _____

Geography of Southern and Eastern Asia

SS7G9 The students will locate selected features in Southern and Eastern Asia.

a. Political features of Southern and Eastern Asia

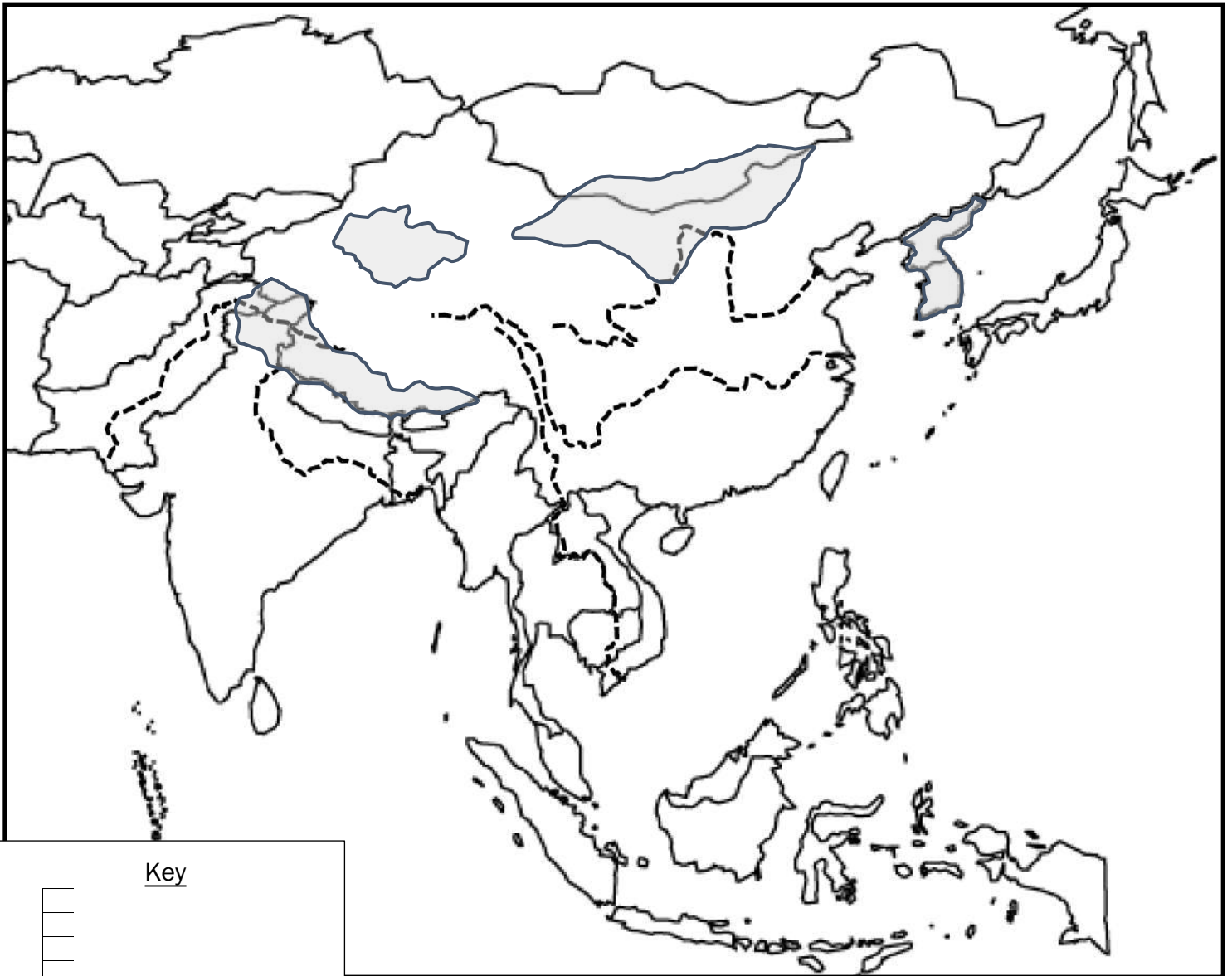


1. Locate (label) these countries: China, India, Indonesia, Japan, North Korea, South Korea, Vietnam, Pakistan
2. Color Vietnam, North Korea, and China red
3. Color India, South Korea, and Japan blue
4. Color Indonesia and Pakistan purple

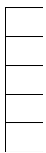
Geography of Southern and Eastern Asia

SS7G9 The students will locate selected features in Southern and Eastern Asia.

a. Physical features of Southern and Eastern Asia



Key



1. Locate (label) these physical features: Ganges River, Huang He River, Indus River, Mekong River, Yangtze River, Bay of Bengal, Indian Ocean, Sea of Japan, South China Sea, Yellow Sea, Gobi Desert, Taklimakan Desert, Himalayan Mountains, Korean Peninsula, Tibetan Plateau
2. Color bodies of water blue
3. Color mountains brown
4. Color deserts yellow
5. Color peninsula orange
6. Color plateau green

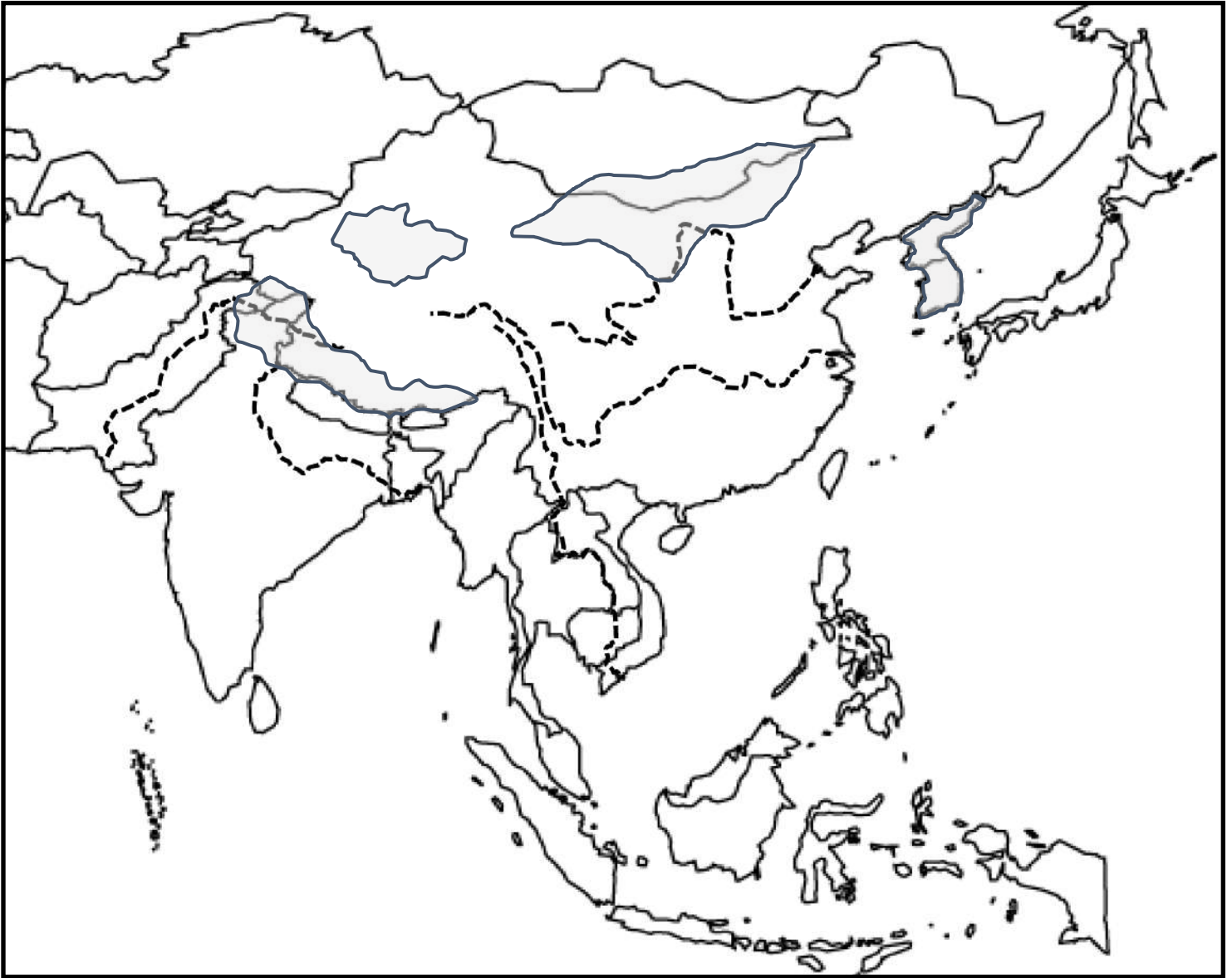
Name: _____

Date: _____ Period: _____

Geography of Southern and Eastern Asia

SS7G9 The students will locate selected features in Southern and Eastern Asia.

a. Political features of Southern and Eastern Asia

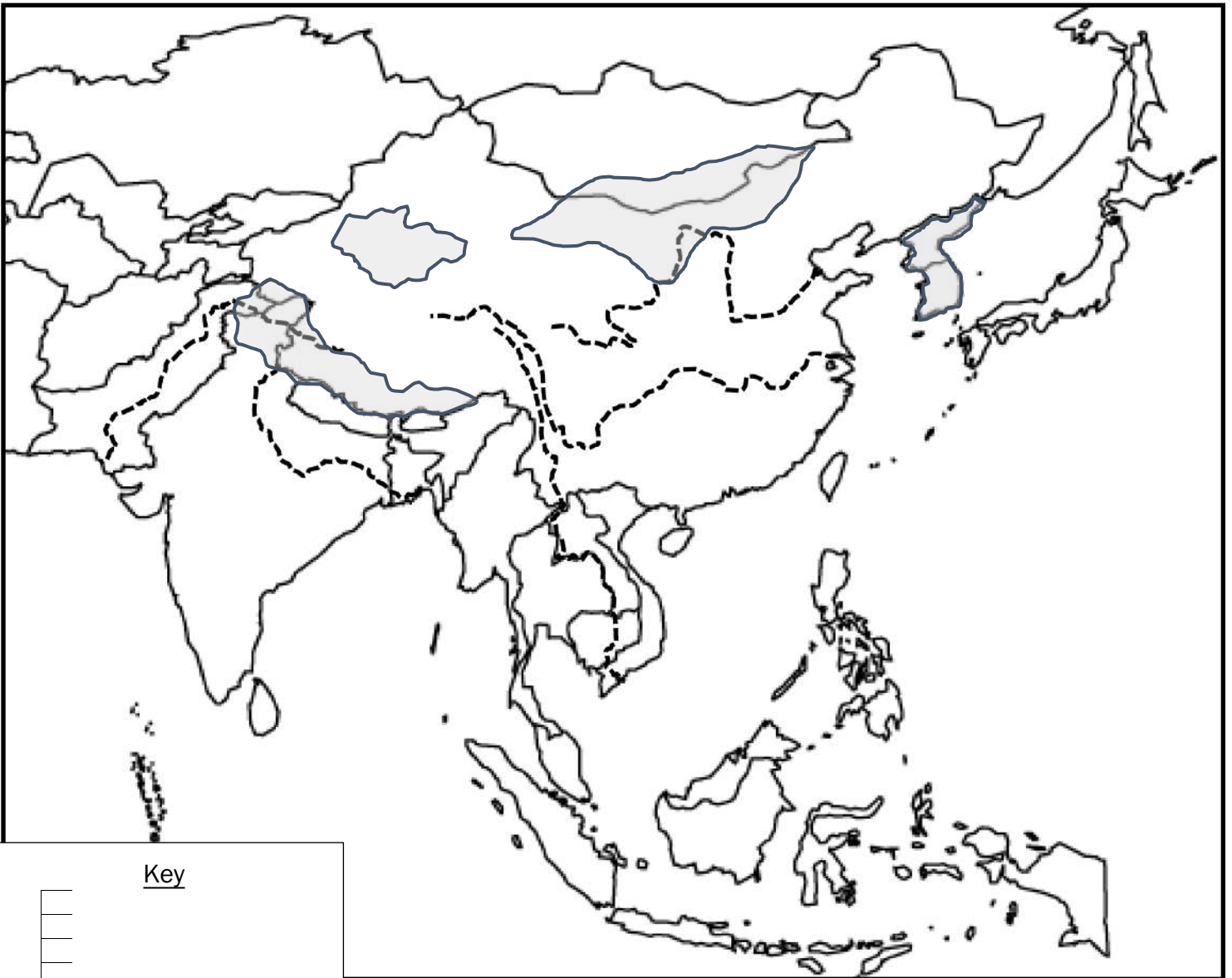


1. Locate (label) these countries: (35°N, 105°E), (20°N, 77°E), Indonesia, Japan, North Korea, (37°N, 127°E), Vietnam, Pakistan
2. Color Vietnam, North Korea, and the country at (35°N, 105°E) red
3. Color Japan and the countries at (20°N, 77°E) and (37°N, 127°E) blue
4. Color Indonesia and Pakistan purple

Geography of Southern and Eastern Asia

SS7G9 The students will locate selected features in Southern and Eastern Asia.

a. Physical features of Southern and Eastern Asia



Key

1. Locate (label) these physical features: (27°N, 80°E), (35°N, 115°E), Indus River, (15°N, 106°E), Yangtze River, Bay of Bengal, Indian Ocean, (40°N, 135°E), South China Sea, Yellow Sea, Gobi Desert, Taklimakan Desert, Himalayan Mountains, Korean Peninsula, (33°N, 90°E)
2. Color bodies of water blue
3. Color mountains brown
4. Color deserts yellow
5. Color peninsula orange
6. Color plateau green

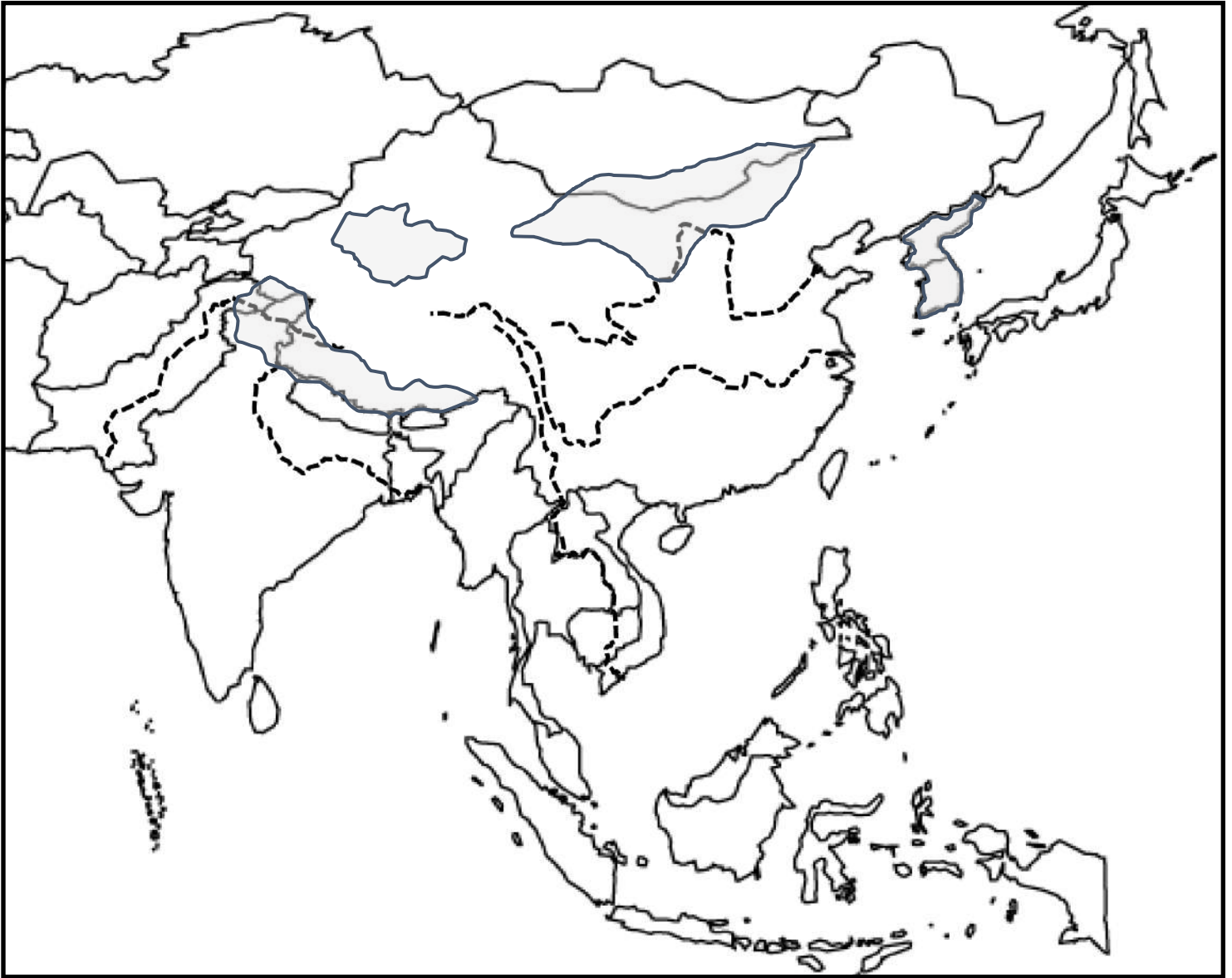
Name: _____

Date: _____ Period: _____

Geography of Southern and Eastern Asia

SS7G9 The students will locate selected features in Southern and Eastern Asia.

a. Political features of Southern and Eastern Asia

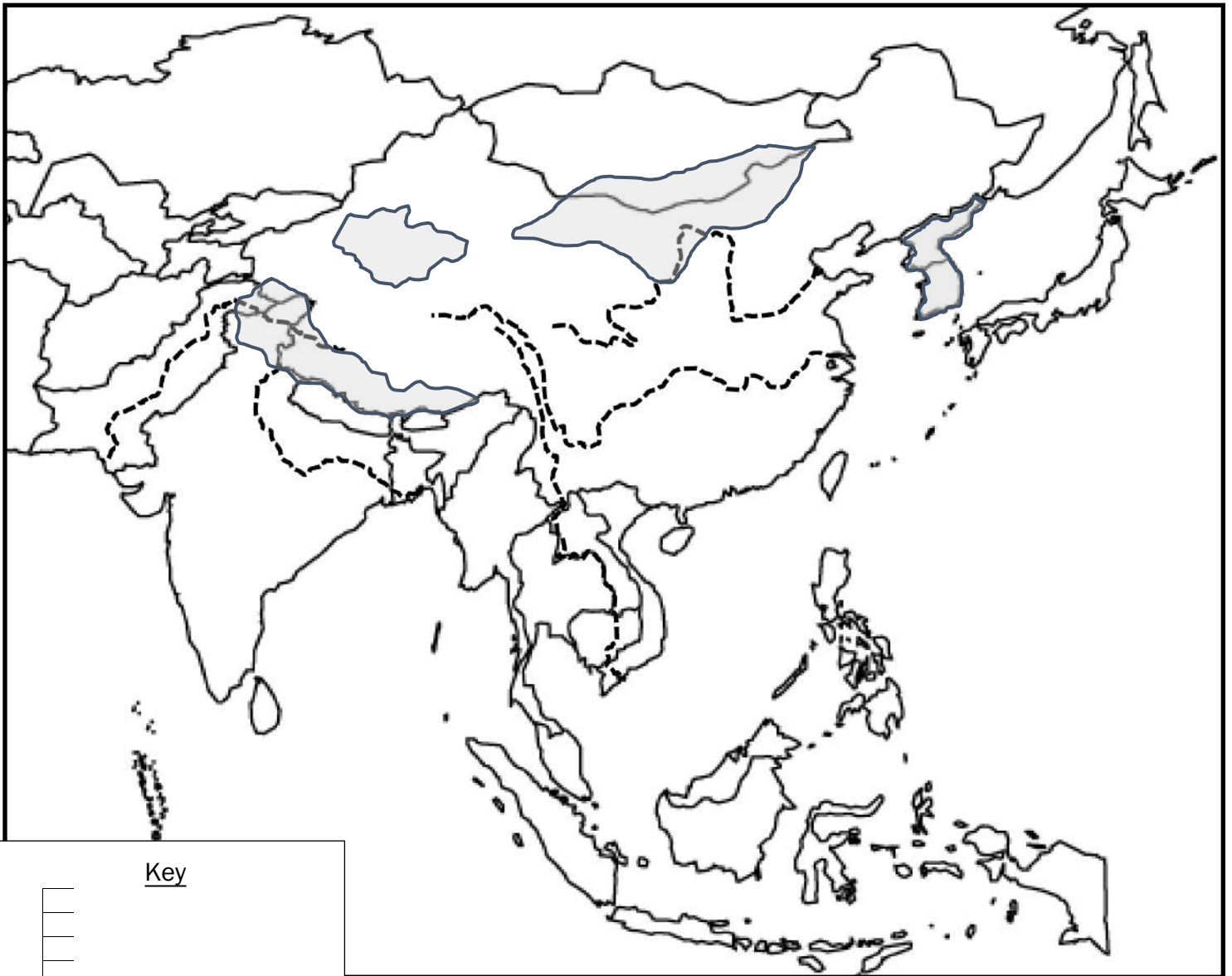


1. Locate (label) these countries: (35°N, 105°E), (20°N, 77°E), (5°S, 120°E), (35°N, 135°E), (40°N, 127°E), (37°N, 127°E), (14°N, 108°E), (30°N, 70°E)
2. Color _____, _____, and _____ red
3. Color _____, _____, and _____ blue
4. Color _____, and _____ purple

Geography of Southern and Eastern Asia

SS7G9 The students will locate selected features in Southern and Eastern Asia.

a. Physical features of Southern and Eastern Asia



Key



1. Locate (label) these physical features: (27°N, 80°E), (35°N, 115°E), Indus River, (15°N, 106°E), (32°N, 120°E), (15°N, 90°E), Indian Ocean, (40°N, 135°E), South China Sea, Yellow Sea, (42°N, 110°E), (40°N, 84°E), Himalayan Mountains, Korean Peninsula, (33°N, 90°E)
2. Color bodies of water blue
3. Color mountains brown
4. Color deserts yellow
5. Color peninsula orange
6. Color plateau green

