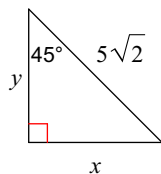


Quiz 12 Review: Special Right Triangles 45-45-90

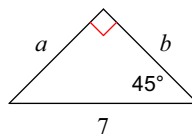
Date _____ Period _____

Find the missing side lengths. Leave your answers as radicals in simplest form.

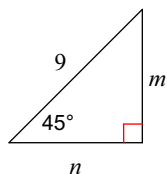
1)



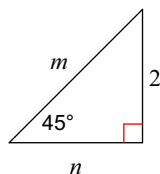
2)



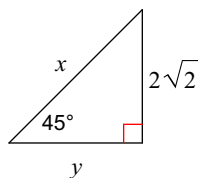
3)



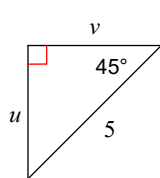
4)



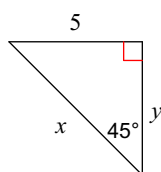
5)



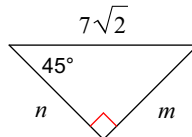
6)



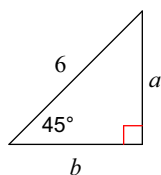
7)



8)



9)



10)

