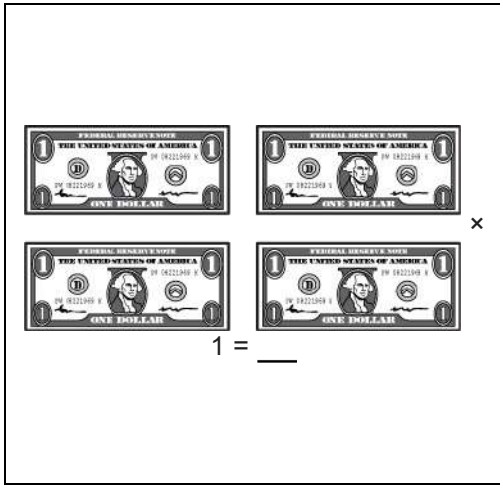


# Math Numbers Operations and Algebra 4\_1

Student Name: \_\_\_\_\_

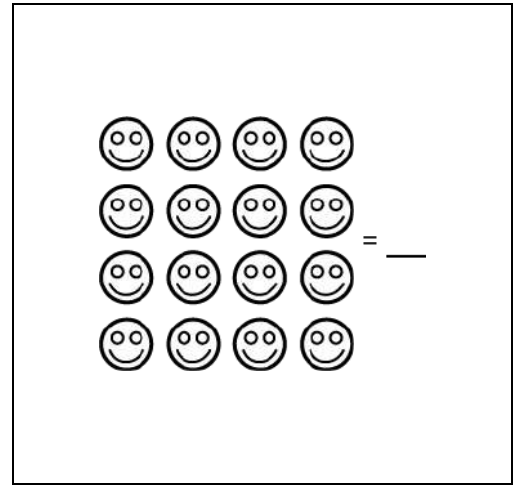
Date: \_\_\_\_\_

1.



- A. \$4.00
- B. \$0.40
- C. \$5.00

2.



- A.  $4 \times 4$
- B.  $4 \times 5$
- C.  $4 \times 6$

3.

Bess gets 3 pounds of candy.  
Each pound costs \$3.07.  
About how much does she pay in all?

- A. \$6
- B. \$8
- C. \$9

4.

$$\begin{array}{r} 423 \\ \times \quad 7 \\ \hline \end{array}$$
  
What do you do first?

- A.  $7 \times 42$
- B.  $7 \times 3$
- C.  $7 \times 2$

5.

There are 4 pitchers.  
Each has 1.8 liters of milk.  
About how many liters of milk in all?


- A. 5
- B. 6
- C. 8

6.

There are 7 rows.  
Each row has 7 pencils.  
How many pencils in all?

- A. 49
- B. 14
- C. 77

7.



Movie tickets cost \$1.50.  
How much do 3 tickets cost?

- A. \$3.50
- B. \$4.50
- C. \$1.53

8.

94 about equals \_\_\_\_

- A.  $20 \times 3$
- B.  $30 \times 2$
- C.  $30 \times 3$

9.

There are 54 bells divided equally into 9 groups.

How many bells in each group?

- A. 7
- B. 6
- C. 5

10.

$$4 \times 3 = \underline{\quad} \times 4$$

- A. 4
- B. 7
- C. 3

11.

67 is about equal to     

- A.  $30 \times 3$
- B.  $60 \times 2$
- C.  $30 \times 2$

12.

79 about equals     

- A.  $40 \times 2$
- B.  $60 \times 2$
- C.  $75 \times 3$

13.

There are 24 coins in 3 equal stacks.  
How many coins in each stack?

- A. 9
- B. 8
- C. 7

14.

A hand is 4 inches long.  
A pony is 7 hands tall.  
About how tall is the pony?


- A. 50 inches
- B. 15 inches
- C. 30 inches

15.

Nan paints nails for her friends.  
Each friend has 10 finger nails and 10  
toe nails.  
She has 12 friends.  
How many nails does she paint in all?

- A. 240
- B. 220
- C. 400

16.



The box has 6 rows.  
Each row has 6 crayons.  
How many crayons in all?

- A. 12
- B. 36
- C. 24