

Georgia
CRCT
online



First Grade Math Quiz 1

First Grade Mathematics
Quiz

Gloria Phelps

Name: _____

Date: _____

Instructions:

Name: _____

Quiz: First Grade Math Quiz 1

Date: _____

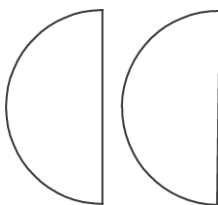
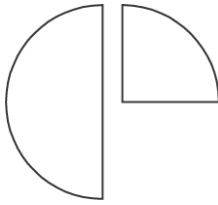
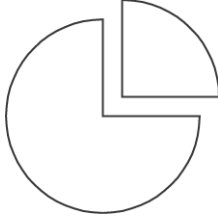
Teacher: Gloria Phelps

1. What fraction of the square is black?



- A. $\frac{1}{2}$
 - B. $\frac{1}{4}$
 - C. $\frac{3}{4}$
-

2. Kim's grandma baked a cherry pie. She cut it in half. Which picture shows grandma's pie cut in half?

- A. 
- B. 
- C. 

Name: _____

Quiz: First Grade Math Quiz 1

Date: _____

Teacher: Gloria Phelps

3. Kendra has to go to room twelve for her music class. Which number is Kendra looking for?

- A. 2
 - B. 12
 - C. 20
-

Look at the number sentence below.

$$9 - 3 \bigcirc 7$$

4. Which sign belongs in the circle?

- A. >
 - B. <
 - C. =
-

Name: _____

Quiz: First Grade Math Quiz 1

Date: _____

Teacher: Gloria Phelps

5. Look at the pictures of balls and bats below. Which picture shows exactly one ball for each bat?



6. What number comes next?

18, 17, 16, _____

A. 14

B. 15

C. 19

Name: _____

Quiz: First Grade Math Quiz 1

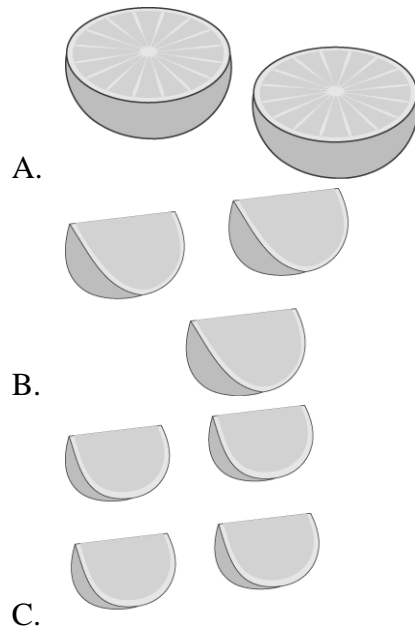
Date: _____

Teacher: Gloria Phelps

7. Which is the number eighteen?

- A. 8
 - B. 18
 - C. 80
-

8. Which orange is sliced into fourths?



Elaine is counting by 2s to 20. **2, 4, 6, and so on**

9. Which of these numbers should she say?

- A. 7
 - B. 11
 - C. 14
-


Name: _____

Quiz: First Grade Math Quiz 1

Date: _____

Teacher: Gloria Phelps

Jessie made the number of cookies shown below.



10. How many cookies did Jessie make?

- A. 10
 - B. 12
 - C. 15
-

11. Which of these equals 12?

- A. $4 + 4$
 - B. $8 + 8$
 - C. $6 + 6$
-

Name: _____

Quiz: First Grade Math Quiz 1

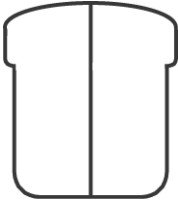

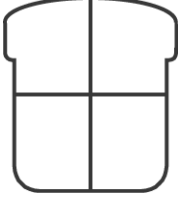
Date: _____

Teacher: Gloria Phelps

12. Which of these shows the word that goes with the number?

- A. 8 ? nine
 - B. 17 ? eleven
 - C. 5 ? five
-

13. Tami cut her sandwich in half. Which is a picture of her sandwich?

- A. 
 - B. 
 - C. 
-


Name: _____

Quiz: First Grade Math Quiz 1

Date: _____

Teacher: Gloria Phelps

14. How many pencils are there in all?



- A. 7
- B. 18
- C. 24

15. Bob is learning to count by twos. He said, “2, 4, 6, 8, 10, 12, 16, 18, 20.” What number did he leave out?

- A. 3
 - B. 11
 - C. 14
-