



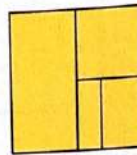
4/30

Fill in the bubble next to the correct answer.

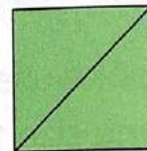
5 Which shape shows halves?



6 Which shape shows 4 quarters?



7 Which shape shows unequal shares?



8 Does the shape show equal shares?
Fill in the bubble to answer.

	Yes	No
	<input type="radio"/>	<input type="radio"/>
	<input type="radio"/>	<input type="radio"/>
	<input type="radio"/>	<input type="radio"/>