

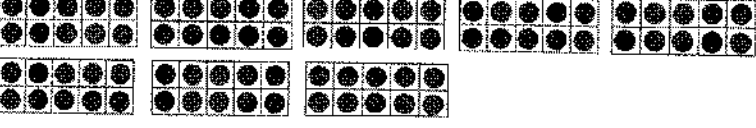




GK-M5-Lesson 15

Count the Say Ten way. Write the missing numbers.

	<p>60</p>	<p><u>6</u> tens</p>
	<p>70</p>	<p>7 tens</p>
	<p>80</p>	<p><u>8</u> tens</p>
	<p>70</p>	<p><u>7</u> tens</p>
	<p>60</p>	<p>6 tens</p>

I can count by tens and the Say Ten way! I count the ten-frames first. There are 6 ten-frames, so that is 6 tens. 6 tens is the same as 60.