

IQ Test

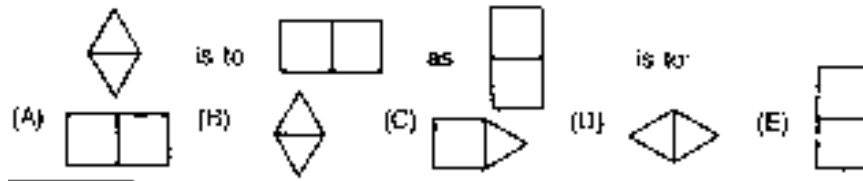
1. Which one of the five is least like the other four?

BEAR - SNAKE - COW - DOG - TIGER

2. If you rearrange the letters "BARBIT", you would have the name of a:

OCEAN - COUNTRY - STATE - CITY - ANIMAL

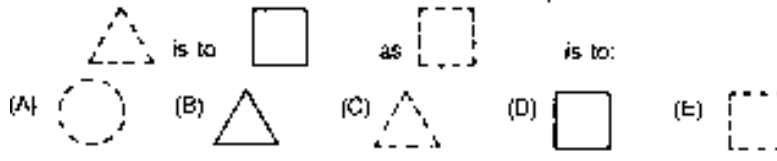
3. Which one of the five designs makes the best comparison?



4. Which one of the five is least like the other four?

POTATO - CORN - APPLE - CARROT - BEAN

5. Which one of the five designs makes the best comparison?



6. John, twelve years old, is three times as old as his brother. How old will John be when he is twice as old as his brother?

15 - 16 - 18 - 20 - 21

7. Which one of the five makes the best comparison?

Brother is to sister as niece is to:

MOTHER - DAUGHTER - AUNT - UNCLE - NEPHEW

8. Which one of the five designs is least like the other four?

A Z F N E

9. Which one of the five makes the best comparison?

Milk is to glass as letter is to:

STAMP - PEN - ENVELOPE - BOOK - MAIL

10. Which one of the five is least like the other four?



11. Which one of the five choices makes the best comparison?

LIVE is to EVIL as 5232 is to:

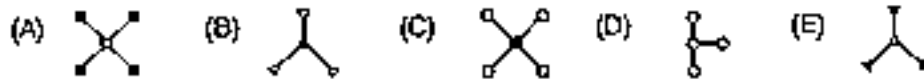
(A) 2523 (B) 3252 (C) 2325 (D) 3225 (E) 5223

1

2. "If some Smaugs are Thors and some Thors are Thrains, then some Smaugs are definitely Thrains."

This statement is: TRUE - FALSE - NEITHER

13. Which one of the five designs is least like the other four?



14. Which one of the five makes the best comparison?

Tree is to ground as chimney is to:

SMOKE - BRICK - SKY - GARAGE - HOUSE

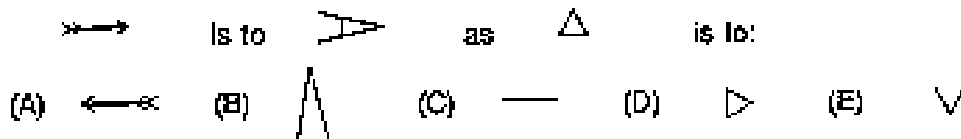
15. Which one of the numbers does not belong in the following series?

9 - 7 - 8 - 6 - 7 - 5 - 6 - 3

16. Which one of the four is least like the other four?

TOUCH - TASTE - HEAR - SMILE - SEE

17. Which one of the five designs makes the best comparison?



18. Jack is taller than Peter, and Bill is shorter than Jack.

Which of the following statements would be most accurate?

(A) Bill is taller than Peter.

(B) Bill is shorter than Peter.

(C) Bill is as tall as Peter.

(D) It is impossible to tell whether Bill or Peter is taller.

19. Which one the five is least like the other four?

STOCKING - DRESS - SHOE - PURSE - HAT

20. Which one of the five makes the best comparison?

CAACCAC is to 3113313 as CACAACAC is to:

(A) 13133131 (B) 13133313 (C) 31311131 (D) 31311313 (E) 31313113

21. If you rearrange the letters "RAPIS", you would have the name of a:
 OCEAN - COUNTRY - STATE - CITY - ANIMAL

22. Which one of the designs is least like the other four?



23. Which one of the five makes the best comparison?
 Bullet is to gun as ball is to:
 BAT - SLINGSHOT - CANNON - PITCHER - CATAPULT

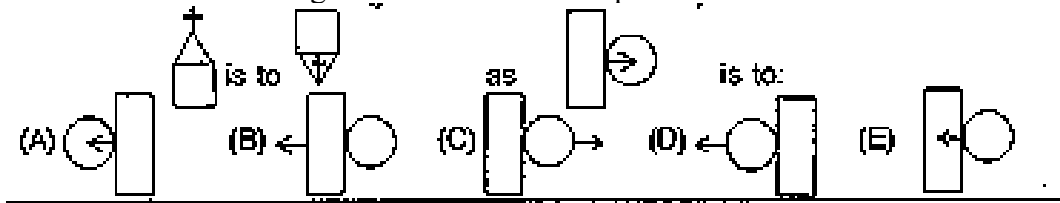
24. "If some Bifurs are Bofurs and all Gloins are Bofurs, then some Bifurs are definitely Gloins."
 This statement is: TRUE - FALSE - NEITHER

25. Which one of the designs is least like the other four?



26. Which one of the letters does not belong in the following series:
 A - D - G - I - J - M - P - S
 The answer is:
 D - I - J - M - S

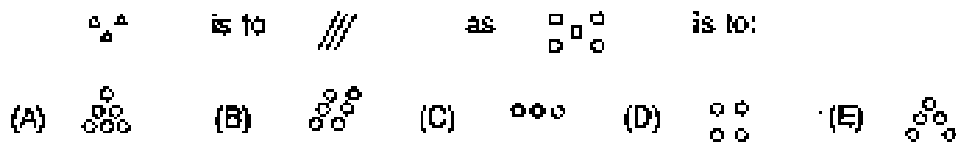
27. Which one of the five designs makes the best comparison?



28. The price of an article was cut 20% for a sale. By what percent must the item be increased to again sell the article at the original price?
 15% - 20% - 25% - 30% - 40%

29. Which one of the five is least like the other four?
 COPPER - IRON - BRASS - TIN - LEAD

30. Which one of the five designs makes the best comparison?



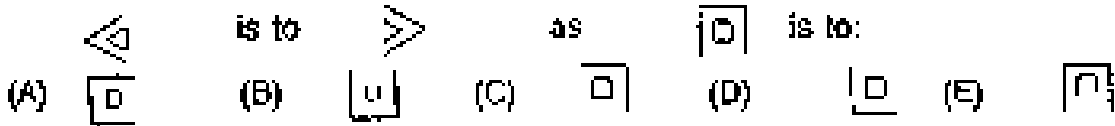
31. Which one of the five is least like the other four?
BOTTLE - CUP - TUB - FUNNEL - BOWL

32. Mary had a number of cookies. After eating one, she gave half the remainder to her sister. After eating another cookie, she gave half of what was left to her brother. Mary now had only five cookies left. How many cookies did she start with?
11 - 22 - 23 - 45 - 46

33. Which one of the five is least like the other four?
WHEAT - HAY - BARLEY - OATS - RICE

34. Which one of the numbers does not belong in the following series?
2 - 3 - 6 - 7 - 8 - 14 - 15 - 30
THREE - SEVEN - EIGHT - FIFTEEN - THIRTY

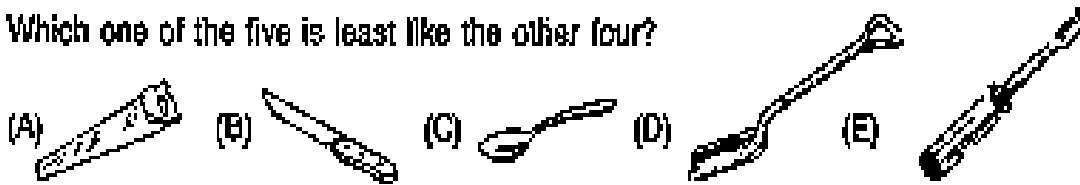
35. Which one of the five designs makes the best comparison?



36. "A spaceship received three messages in a strange language from a distant planet. The astronauts studied these messages and found that "Elros Aldarion Elendil" means "Danger Rocket Explosion" and "Edain Mnyatur Elros" means "Danger spaceship Fire" and "Aldarion Gimilzor Gondor" means "Bad Gas Explosion".
What does "Elendil" mean?
DANGER - EXPLOSION - NOTHING - ROCKET - GAS

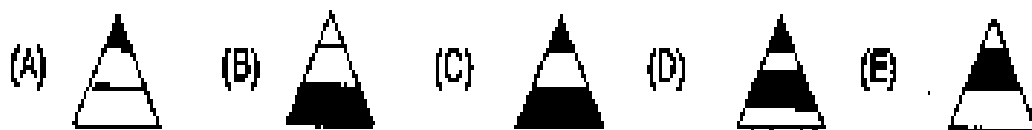
37. Which one of the five is least like the other four?

Which one of the five is least like the other four?



38. Which one of the five makes the best comparison?
Belt is to buckle as shoe is to:
SOCK - TOE - FOOT - LACE - SOLE

39. Which one of the five designs is least like the other four?




40. John received \$.41 change from a purchase in the drugstore.
 If he received six coins, three of the coins had to be:
 PENNIES - NICKLES - DIMES - QUARTERS - HALF-DOLLARS

41. Which one of the five designs is least like the other four?



42. If you rearrange the letters "MANGERY", you would have the name of a:
 OCEAN - COUNTRY - STATE - CITY - ANIMAL

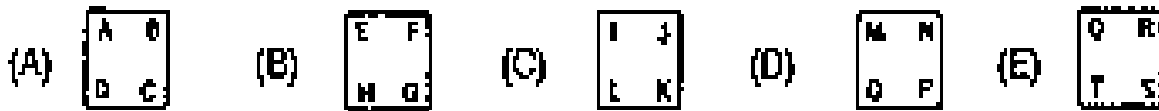
43. Which one of the five designs makes the best comparison?



44. "If all Wargs are Twerps and no Twerps are Gollums, then no Gollums are definitely Wargs."
 This statement is: TRUE - FALSE - NEITHER

45. Which one of the five is least like the other four?
 HORSE - KANGAROO - ZEBRA - DEER - DONKEY

46. Which one of the designs does not belong in the following series?



47. Which one of the five makes the best comparison?
 Finger is to hand as leaf is to:
 TREE - BRANCH - BLOSSOM - TWIG - BARK

48. "John's mother sent him to the store to get 9 large cans of peaches. John could only carry 2 cans at a time. How many trips to the store did John have to make?
 4 - 4½ - 5 - ½ - 6

49. Which one of the five designs is least like the other four?

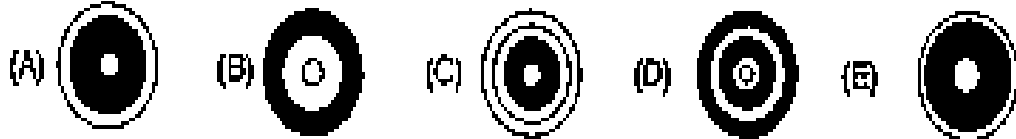


50. Which one of the five make the best comparison?

Foot is to knee as hand is to:

FINGER - ELBOW - TOE - LEG - ARM

51. Which one of the five designs is least like the other four?



52. Mary was both 13th highest and 13th lowest in a spelling contest.

How many people were in the contest?

13 - 25 - 26 - 27 - 28

53. Which one of the five makes the best comparison?

Water is to ice as milk is to:

HONEY - CHEESE - CEREAL - COFFEE - COOKIE

54. Which one of the numbers does not belong in the following series?

1 - 2 - 5 - 10 - 13 - 26 - 29 - 48

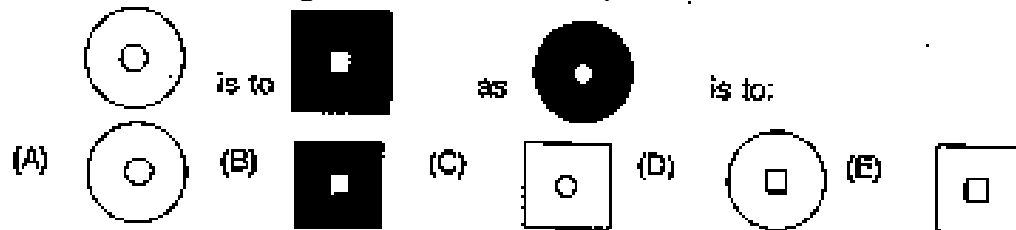
55. Which one of the five is least like the other four?

HAM - LIVER - SALMON - PORK - BEEF

56. "If all Fleeps are Sloops and all Sloops are Loopies, then all Fleeps are definitely Loopies."

This statement is: TRUE - FALSE - NEITHER

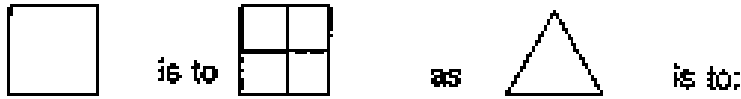
57. Which one of the five designs makes the best comparison?



58. Which one of the five is least like the other four?

INCH - MILE - ACRE - YARD - FOOT

59. Which one of the five designs makes the best comparison?



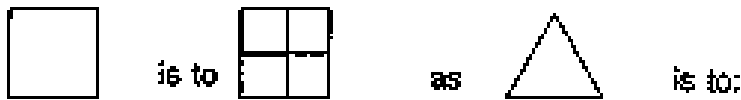
- (A)  (B)  (C)  (D)  (E) 

60. "A fish has a head 9" long. The tail is equal to the size of the head plus one-half the size of the body. The body is the size of the head plus the tail."

How long is the fish?

27" - 54" - 63" - 72" - 81"

59. Which one of the five designs makes the best comparison?



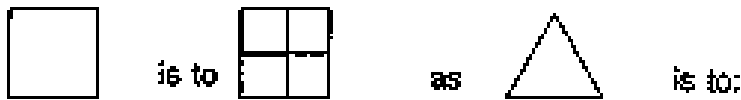
- (A)  (B)  (C)  (D)  (E) 

60. "A fish has a head 9" long. The tail is equal to the size of the head plus one-half the size of the body. The body is the size of the head plus the tail."

How long is the fish?

27" - 54" - 63" - 72" - 81"

59. Which one of the five designs makes the best comparison?



- (A)  (B)  (C)  (D)  (E) 

60. "A fish has a head 9" long. The tail is equal to the size of the head plus one-half the size of the body. The body is the size of the head plus the tail."

How long is the fish?

27" - 54" - 63" - 72" - 81"