


Identifying Parallel, Perpendicular and Intersecting Lines in Quadrilaterals

Name: _____ Mailbox # _____

1. Shape name: _____



➤ Parallel Lines? Yes No
How many pairs? _____

➤ Perpendicular Lines? Yes No
How many pairs? _____

➤ Intersecting Lines? Yes No
How many pairs? _____

2. Shape name: _____




➤ Parallel Lines? Yes No
How many pairs? _____

➤ Perpendicular Lines? Yes No
How many pairs? _____

➤ Intersecting Lines? Yes No
How many pairs? _____

3. Shape name: _____




➤ Parallel Lines? Yes No
How many pairs? _____

➤ Perpendicular Lines? Yes No
How many pairs? _____

➤ Intersecting Lines? Yes No
How many pairs? _____

4. Shape name: _____



➤ Parallel Lines? Yes No
How many pairs? _____

➤ Perpendicular Lines? Yes No
How many pairs? _____

➤ Intersecting Lines? Yes No
How many pairs? _____