

Name _____

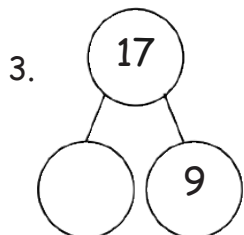
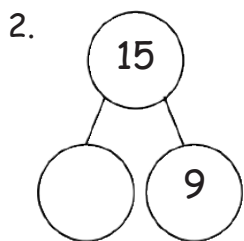
Date _____

Write the number sentence for each 5-group row drawing.

1.

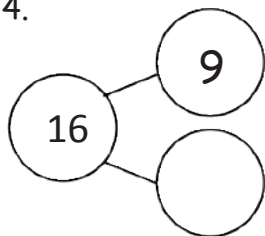
	$\underline{13 - 9 = 4}$
	<hr style="border: 0; border-top: 1px solid black;"/>
	<hr style="border: 0; border-top: 1px solid black;"/>
	<hr style="border: 0; border-top: 1px solid black;"/>
	<hr style="border: 0; border-top: 1px solid black;"/>
	<hr style="border: 0; border-top: 1px solid black;"/>

Draw 5-groups to complete the number bond, and write the 9- number sentence.



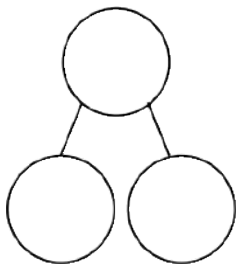
Draw 5-groups to complete the number bond, and write the 9- number sentence.

4.



Draw 5-groups to show making ten and taking from ten to solve the two number sentences. Make a number bond, and write two additional number sentences that would have this number bond.

5. $8 + 9 = \underline{\quad}$



6. $17 - 9 = \underline{\quad}$

