


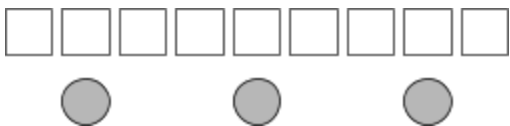
Card Sort: Spaghetti Sauce  
Diagram A



Card Sort: Spaghetti Sauce  
Sentence 4

There are 3 cups of tomato sauce for every tablespoon of oil.

Card Sort: Spaghetti Sauce  
Diagram B



Card Sort: Spaghetti Sauce  
Sentence 2

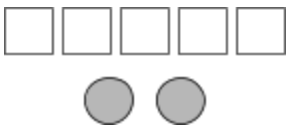
There are 3 tablespoons of oil for every cup of tomato sauce.

*The above diagram also matches this sentence.*

Card Sort: Spaghetti Sauce  
Sentence 8

The ratio of cups of tomato sauce to tablespoons of oil is 1 : 3.

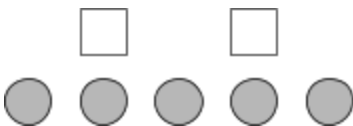
Card Sort: Spaghetti Sauce  
Diagram C



Card Sort: Spaghetti Sauce  
Sentence 1

The ratio of tablespoons of oil to cups of tomato sauce is 5 to 2.

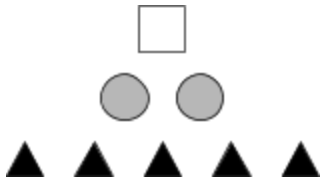
Card Sort: Spaghetti Sauce  
Diagram D



Card Sort: Spaghetti Sauce  
Sentence 5

The ratio of cups of tomato sauce to tablespoons of oil is 5 to 2.

Card Sort: Spaghetti Sauce  
Diagram E



Card Sort: Spaghetti Sauce  
Sentence 3

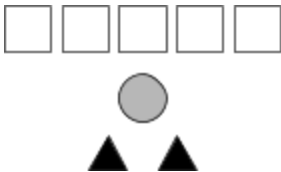
For every tablespoon of oil, there are 2 cups of tomato sauce and 5 teaspoons of oregano.

*The above diagram also matches this sentence.*

Card Sort: Spaghetti Sauce  
Sentence 7

Tablespoons of oil, teaspoons of oregano, and cups of tomato sauce are in the ratio 1 : 5 : 2.

Card Sort: Spaghetti Sauce  
Diagram F



Card Sort: Spaghetti Sauce  
Sentence 6

Cups of tomato sauce, tablespoons of oil, and teaspoons of oregano are in the ratio 1 : 5 : 2.