

---

NAME

DATE

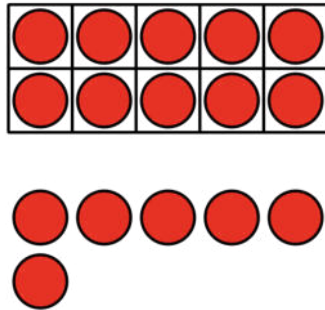
PERIOD

## U6: Numbers 0 - 20: End-of-Unit Assessment

1. **Draw 17** dots. Use the 10-frame if it helps you.


2. Write a **number** to answer each question.

**How many** dots are there?




Write a number.

\_\_\_\_\_

-----

\_\_\_\_\_

**How many** dots are there?




Write a number.

\_\_\_\_\_

-----

\_\_\_\_\_

**How many** fingers are there?



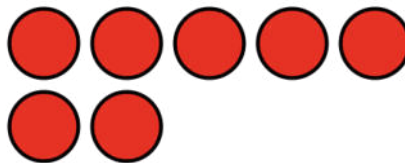
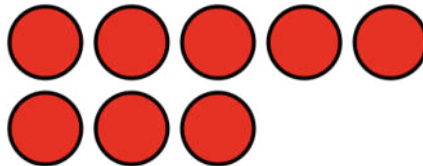

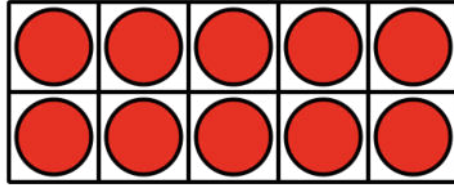
Write a number.

\_\_\_\_\_

-----

\_\_\_\_\_


3. **Circle** the 2 images that make 14 dots together.



NAME

DATE

PERIOD



4. Write the **number** that makes each equation true.

$$10 + 2 = \underline{\quad}$$

$$10 + 4 = \underline{\quad}$$

$$7 + 10 = \underline{\quad}$$

---

NAME

DATE

PERIOD