

---

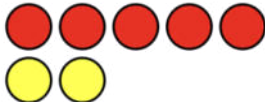
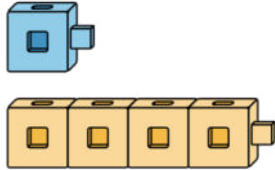
NAME

DATE

PERIOD

### U5: Decomposing Numbers to 10: End-of-Unit Assessment

1. Write an **expression** for each picture.



---

NAME

DATE

PERIOD

2. Write the **number** that makes 10 with each number.

5

\_\_\_\_\_

-----

\_\_\_\_\_

9

\_\_\_\_\_

-----

\_\_\_\_\_

4

\_\_\_\_\_

-----


\_\_\_\_\_

NAME

DATE

PERIOD

3. Mai has a train of 7 connecting cubes.



She snaps the train into two pieces.

Show 1 way to snap the cubes.

Show a different way to snap the cubes.

---

NAME

DATE

PERIOD

4. Diego has 3 toy cars on the floor.  
He has 5 more toy cars on the bed.

**How many** toy cars does Diego have altogether?

*Show your thinking using drawings, numbers, words, or objects.*