


NAME

DATE

PERIOD

U4: Understanding Addition and Subtraction: End-of-Unit Assessment

1. **How many** shapes are there?



NAME

DATE

PERIOD

2. There are 3 stickers on the book.
Then Jada puts 2 more stickers on the book.

How many stickers are on the book now?

Show your thinking using drawings, numbers, words, or objects.

NAME

DATE

PERIOD

3. There are 6 kids playing in the park.
2 of the kids leave the park to go home.

How many kids were playing in the park now?

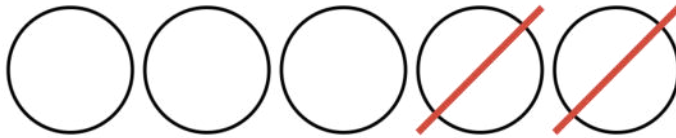
Show your thinking using drawings, numbers, words, or objects.

NAME _____


DATE _____

PERIOD _____

4. Draw a line to **match** each picture with the expression it shows.



$$3 + 4$$

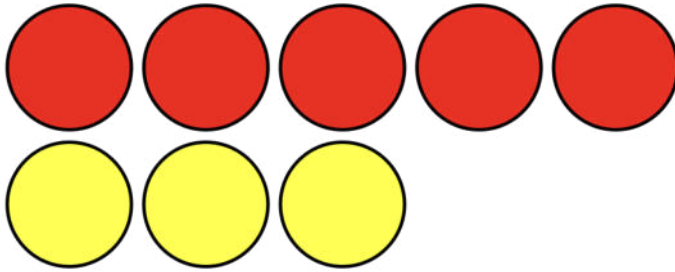


$$5 + 3$$

NAME

DATE

PERIOD



$$5 - 2$$

5. **Write** the value of each expression.

$$2 + 3$$

NAME

DATE

PERIOD

<hr/> <hr style="border-top: 1px dashed;"/> <hr/>	8 - 1
<hr/> <hr style="border-top: 1px dashed;"/> <hr/>	3 + 0