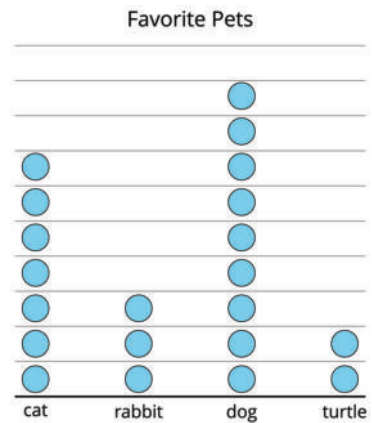



1. The graph shows the favorite pets of a group of students.

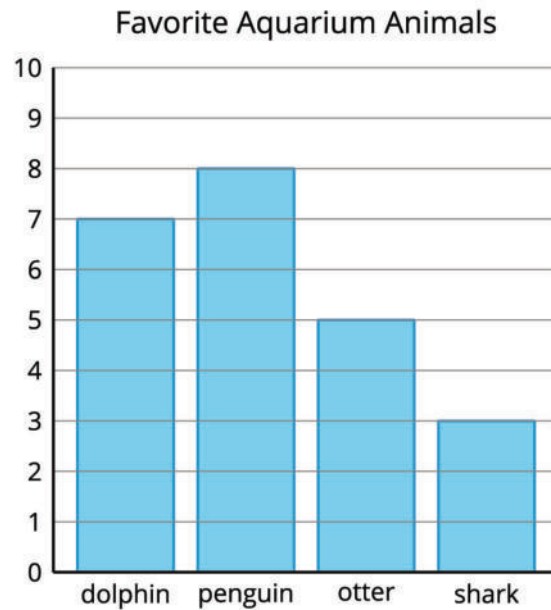
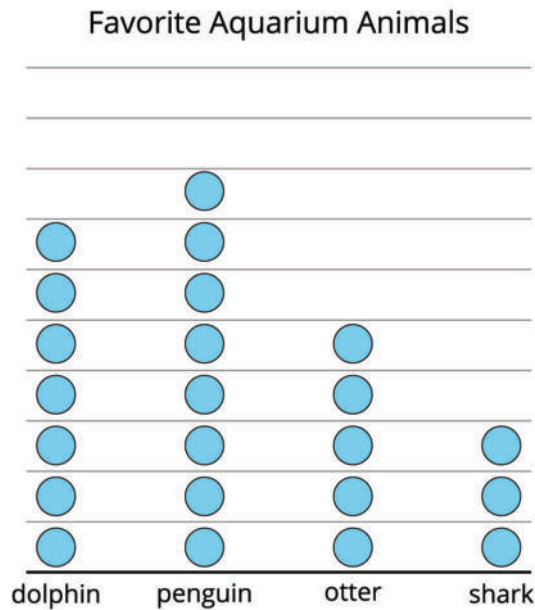


- a. How many students' favorite pet was a dog? \_\_\_\_\_
- b. How many students' favorite pet was a rabbit or cat? \_\_\_\_\_
2. The table shows the favorite vacation activities for students in a class. Use the table to complete the bar graph.

biking	6
reading	4
swimming	9
hiking	5



3. The picture graph and bar graph represent students' favorite animals at the aquarium.



- a. How are the picture graph and bar graph the same?  
How are they different?
- b. How many students liked either dolphins or otters the most?