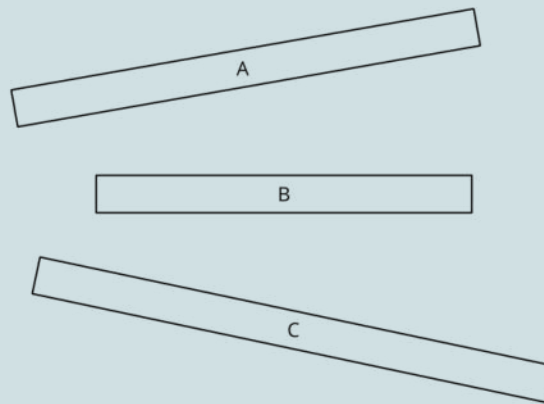


U6: Length Measurements Within 120 Units: End-of-Unit Assessment

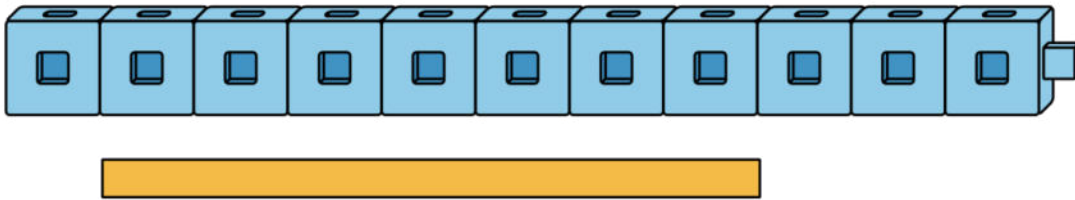
1.



Write a sentence comparing the length of Rectangle A and the length of Rectangle B.

Write a sentence comparing the length of Rectangle A and the length of Rectangle C.

2. **How many** connecting cubes **long** is the rectangle?



3. The straw is longer than the pencil.
The noodle is shorter than the pencil.

Circle 2 true statements.

The straw is longer than the noodle.

The straw is shorter than the noodle.

The noodle is longer than the straw.

NAME

DATE

PERIOD


The noodle is shorter than the straw.

4. **How many** connecting cubes are there?

NAME

DATE

PERIOD



Assessment questions derived from IM K-5 Math™ by [Kendall Hunt Publishing](#). Licensed under the [Creative Commons Attribution 4.0 license](#). Formatting enhanced by Tomé Education LLC - Gotzee! and Great Prairie AEA.

NAME

DATE

PERIOD

5. Mai's straw is 15 cubes long.
Noah's straw is 7 cubes shorter than Mai's straw.

How many cubes long is Noah's straw?

Show your thinking using drawings, numbers, words, or equations.

NAME

DATE

PERIOD

6. There were some students on the bus.
7 students got off at the bus stop.
Now there are 6 students on the bus.

Write an equation that matches the story. Use a **?** for the unknown number.

How does the equation match the story?

Show your thinking using drawings, numbers, or words.

How many students were on the bus before the stop?

Show your thinking using drawings, numbers, words, or equations.

Assessment questions derived from IM K-5 Math™ by [Kendall Hunt Publishing](#). Licensed under the [Creative Commons Attribution 4.0 license](#). Formatting enhanced by Tomé Education LLC - Gotzee! and Great Prairie AEA.

NAME

DATE

PERIOD

Assessment questions derived from IM K-5 Math™ by [Kendall Hunt Publishing](#). Licensed under the [Creative Commons Attribution 4.0 license](#). Formatting enhanced by Tomé Education LLC - Gotzee! and Great Prairie AEA.