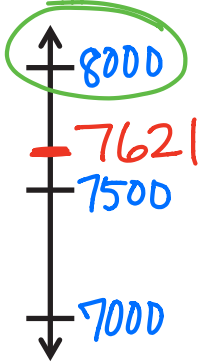


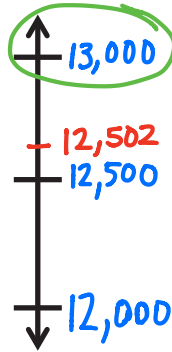
Name \_\_\_\_\_

Date \_\_\_\_\_

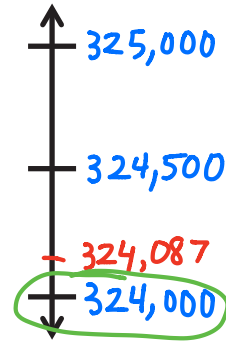
1. Round to the nearest thousand. Use the number line to model your thinking.



a.  $7,621 \approx \underline{8,000}$




b.  $12,502 \approx \underline{13,000}$



c.  $324,087 \approx \underline{324,000}$

2. It takes 39,090 gallons of water to manufacture a new car. Sammy thinks that rounds up to about 40,000 gallons. Susie thinks it is about 39,000 gallons. Who rounded to the nearest thousand, Sammy or Susie? Use pictures, numbers, or words to explain.



This number line shows that 39,090 rounded to the nearest thousand is 39,000. So Susie rounded to the nearest thousand.