

Georgia
CRCT
online



Geometry and Measurement Test 4

Fourth Grade Mathematics
Test

Geoff Chandler

Name: _____

Date: _____

Instructions:

Name: _____

Test: Geometry and Measurement

Date: _____

Teacher: Geoff Chandler

1. The height of a teacher's desk would be about

- A. 100 millimeters
 - B. 5 centimeters
 - C. 1 meter
 - D. 2 kilometers
-

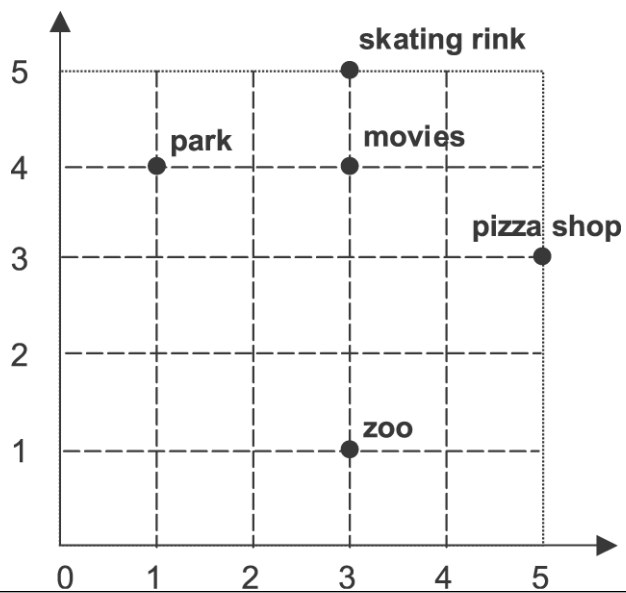
Name: _____

Test: Geometry and Measurement

Date: _____

Teacher: Geoff Chandler

2. Which is located at (5, 3)?



Name: _____

Test: Geometry and Measurement

Date: _____

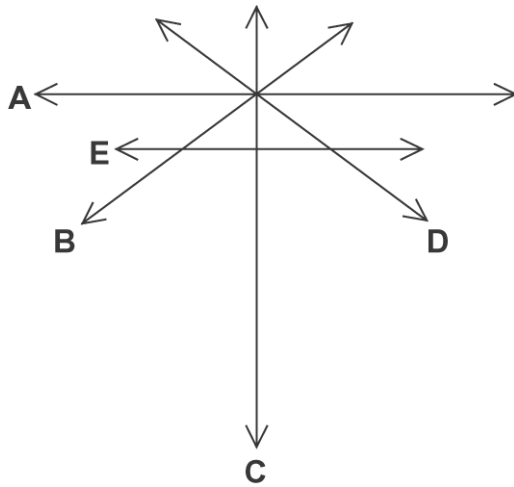
Teacher: Geoff Chandler

- A. zoo
 - B. movies
 - C. pizza shop
 - D. skating rink
-

3. Pedro started his newspaper route today at 6:30 A.M. He finished at 8:05 A.M. How long did it take Pedro to deliver the newspapers?

- A. 1 hour 25 minutes
 - B. 1 hour 35 minutes
 - C. 2 hours 25 minutes
 - D. 2 hours 35 minutes
-

4. Which line is parallel to line E?



Name: _____

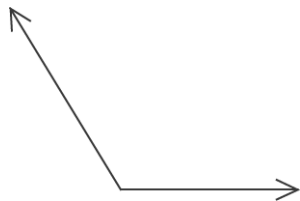
Test: Geometry and Measurement

Date: _____

Teacher: Geoff Chandler

- A. line A
 - B. line B
 - C. line C
 - D. line D
-

5. Identify the angle.



- A. right angle
 - B. acute angle
 - C. obtuse angle
 - D. equilateral angle
-

6. What time is shown on this clock?



- A. 1:34
 - B. 2:40
 - C. 3:32
 - D. 7:10
-

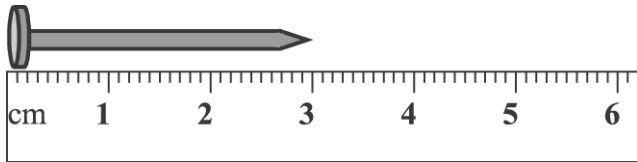
Name: _____

Test: Geometry and Measurement

Date: _____

Teacher: Geoff Chandler

7. How many centimeters long is the nail?



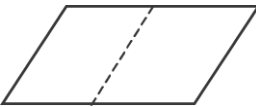



- A. 6
 - B. 4
 - C. 3
 - D. 1
-

8. Which unit is BEST for measuring how long a baseball game lasts?

- A. days
 - B. weeks
 - C. seconds
 - D. hours
-

9. Which shape can be folded along the dotted line so that both sides will match exactly?

- A. 
 - B. 
 - C. 
 - D. 
-

Name: _____

Test: Geometry and Measurement

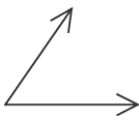



Date: _____

Teacher: Geoff Chandler

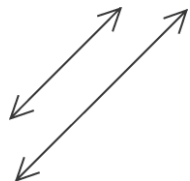
10. Which is the BEST unit of measure for how long a person sleeps at night?

- A. seconds
 - B. hours
 - C. minutes
 - D. days
-

11. Which of the pictures shows a ray?

- A. 
 - B. 
 - C. 
 - D. 
-

12. Which of the following describes these lines?



- A. parallel
 - B. perpendicular
 - C. symmetrical
 - D. vertical
-

Name: _____

Test: Geometry and Measurement

Date: _____

Teacher: Geoff Chandler

13. Tanesha went to the music store to buy two CDs. One CD cost \$11.63 and the other was \$6.38. How much did she spend?

- A. \$12.74
 - B. \$17.35
 - C. \$17.95
 - D. \$18.01
-

14. Tony arrived at the amusement park with some friends at 10:30 A.M. He left the amusement park at 6:45 P.M. How long did Tony stay at the amusement park?

- A. 16 hours 75 minutes
 - B. 8 hours 15 minutes
 - C. 7 hours 45 minutes
 - D. 3 hours 85 minutes
-

15. Lucia wanted to buy a chicken sandwich for \$1.40. She has 3 quarters, 4 dimes, and 1 nickel. How much more money does Lucia need?

16. What unit would you use to measure a paperclip?

- A. inches
 - B. feet
 - C. yards
 - D. miles
-

Name: _____

Test: Geometry and Measurement

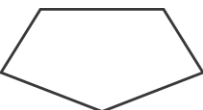



Date: _____

Teacher: Geoff Chandler

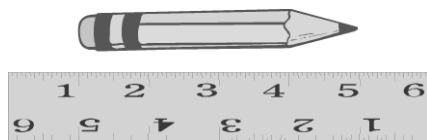
17. Travis is making a vegetable garden. One side is 4 feet long and the other side is 9 feet long. What is the area of his rectangular vegetable garden?

- A. 16 sq. ft.
 - B. 26 sq. ft.
 - C. 32 sq. ft.
 - D. 36 sq. ft.
-

18. Which has parallel sides?

- A. 
 - B. 
 - C. 
 - D. 
-

19. How long is the pencil?



- A. 4
 - B. 5
 - C. 6
 - D. 7
-

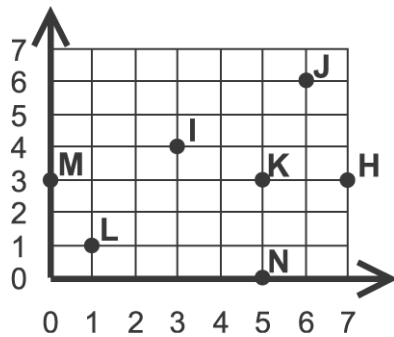
Name: _____

Test: Geometry and Measurement

Date: _____

Teacher: Geoff Chandler

20. Which point is located by the ordered pair $(0, 3)$?



- A. K
- B. L
- C. M
- D. N

21. Mrs. Chang's class begins at 8:30. Kati was 20 minutes late to class. What time did Kati come to class?

- A. 8:00
 - B. 8:10
 - C. 8:20
 - D. 8:50
-