

Georgia
CRCT
online



Math Quiz 2.1

Third Grade Mathematics
Quiz

Gloria Key

Name: _____

Date: _____

Instructions:

--


Name: _____

Quiz: Math Quiz 2.1

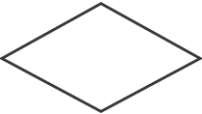



Date: _____

Teacher: Gloria Key

Use the figure below to answer question 1.



1. Which shape is congruent to the figure above?

- A. 
 - B. 
 - C. 
 - D. 
-

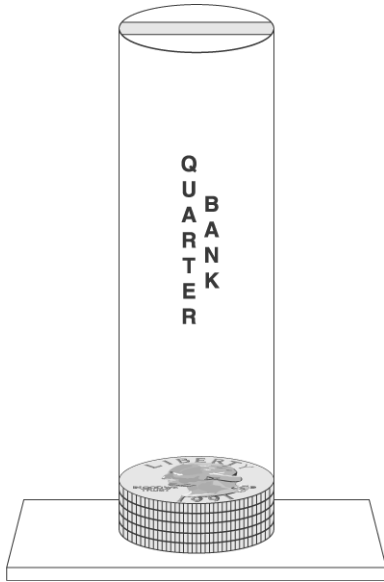
Name: _____

Quiz: Math Quiz 2.1

Date: _____

Teacher: Gloria Key

2. Kathi has a special bank to save only quarters. She wants to find out how many quarters will fill her bank. She has already saved FIVE quarters.



About how many quarters will the bank MOST LIKELY hold?

- A. 25
 - B. 50
 - C. 90
 - D. 150
-

Name: _____

Quiz: Math Quiz 2.1

Date: _____

Teacher: Gloria Key

Use the calendar below to answer question 3.

December						
S	M	T	W	T	F	S
	1	2	3	4	5	6
7	8	9	10	11	12	13
14	15	16	17	18	19	20
21	22	23	24	25	26	27
28	29	30	31			

3. Which is the date of the fourth Monday of the month?

- A. December 8
 - B. December 15
 - C. December 22
 - D. December 29
-

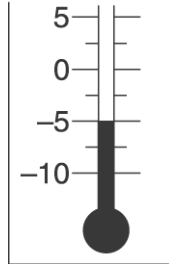
Name: _____

Quiz: Math Quiz 2.1

Date: _____

Teacher: Gloria Key

The thermometer shows the temperature on a certain morning.



4. Which is the temperature?

- A. 10 degrees above zero
 - B. 5 degrees above zero
 - C. 5 degrees below zero
 - D. 10 degrees below zero
-

Name: _____

Quiz: Math Quiz 2.1





Date: _____

Teacher: Gloria Key

5. Below is a picture of a symmetric design which has been folded on its line of symmetry.



Which is a picture of the design when the paper is unfolded?

- A. 
- B. 
- C. 
- D. 

-
6. Which letter can be folded in half so the sides match?

- A. W
B. N
C. L
D. S
-

Name: _____


Quiz: Math Quiz 2.1

Date: _____


Teacher: Gloria Key

Use the clocks below to answer question 7.

Starting time of
spelling class



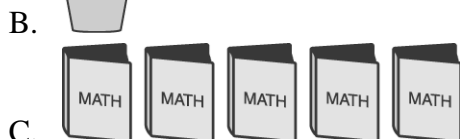
Ending time of
spelling class



7. How long did the spelling class last?

- A. 4 minutes
- B. 15 minutes
- C. 20 minutes
- D. 40 minutes

8. Which weighs the most?



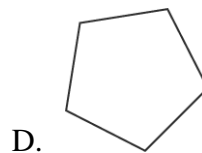
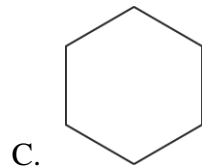

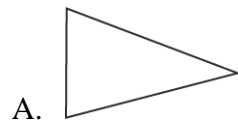
Name: _____

Quiz: Math Quiz 2.1

Date: _____

Teacher: Gloria Key

9. Which figure below does NOT have all sides equal?



Name: _____

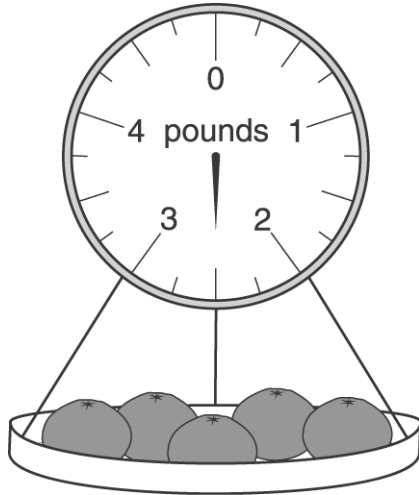
Quiz: Math Quiz 2.1

Date: _____

Teacher: Gloria Key

Use the picture below to answer question 10.

10. The scale shown here measures weight in pounds. What is the total weight of the oranges in the picture?



- A. $2\frac{1}{2}$ pounds
B. $3\frac{1}{2}$ pounds
C. 3 pounds
D. 6 pounds
-

Name: _____

Quiz: Math Quiz 2.1

Date: _____

Teacher: Gloria Key

Use the calendar below to answer question 11

July						
S	M	T	W	T	F	S
			1	2	3	4
5	6	7	8	9	10	11
12	13	14	15	16	17	18
19	20	21	22	23	24	25
26	27	28	29	30	31	

11. What date is the second Saturday of the month?

- A. July 11
 - B. July 18
 - C. July 25
 - D. July 27
-

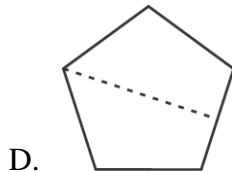
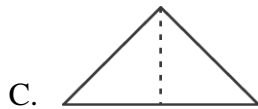
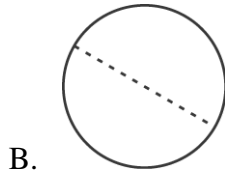
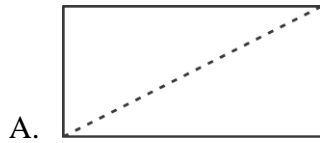
Name: _____

Quiz: Math Quiz 2.1

Date: _____

Teacher: Gloria Key

12. Which figure will NOT match exactly when you fold it along the dotted line?



13. Which is the smallest unit of measure?

- A. foot
- B. inch
- C. mile
- D. yard

14. Which is the BEST estimate of the weight of an average-sized adult house cat?

- A. 2 lbs.
 - B. 13 lbs.
 - C. 50 lbs.
 - D. 100 lbs.
-

Name: _____

Quiz: Math Quiz 2.1

Date: _____

Teacher: Gloria Key

Use the calendar below to answer question 15.

August						
S	M	T	W	T	F	S
		1	2	3	4	5
6	7	8	9	10	11	12
13	14	15	16	17	18	19
20	21	22	23	24	25	26
27	28	29	30	31		

15. Today is August 3. Sarah has a dental appointment 3 weeks from today. On which date is her appointment?

- A. August 6
 - B. August 24
 - C. August 26
 - D. August 31
-