
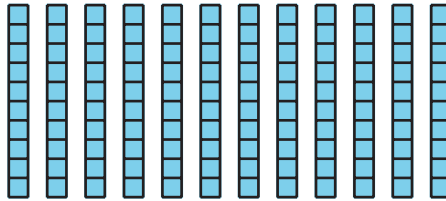





Section A Checkpoint

1. Andre said you could represent 500 using 50 ten blocks. Lin said you could represent 500 using 2 hundreds blocks and 30 ten blocks.

Explain why they are both correct.



2. a. Represent the value of these blocks using the fewest amount of blocks. Show your thinking using a base-ten diagram, words, or numbers.

- b. Represent the value of the blocks in a different way using base-ten blocks, words, or numbers.

3. Represent 492 using expanded form and number names.