

Georgia
CRCT
online



Math - 4th grade Practice Test

Fourth Grade Mathematics
Test

Suzy Skelton

Name: _____

Date: _____

Instructions:

Bubble in the correct answer. Read each choice before marking your answer.

Name: _____

Test: Math - 4th grade Practice T

Date: _____

Teacher: Suzy Skelton

1. Round 37 to the nearest ten.


- A. 50
 - B. 40
 - C. 30
 - D. 20
-

2. Solve.

$$20 \times 100 = \underline{\quad}$$

- A. 20
 - B. 200
 - C. 2,000
 - D. 20,000
-

3. Which decimal is less than 2.54?



- A. 2.45
 - B. 4.25
 - C. 4.52
 - D. 5.42
-

Name: _____

Test: Math - 4th grade Practice T

Date: _____

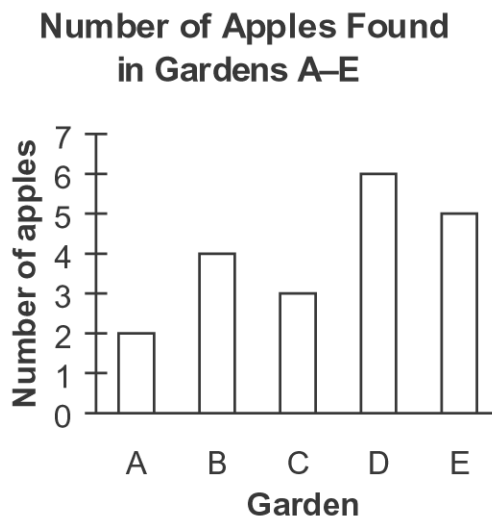
Teacher: Suzy Skelton

4. Which symbol makes this sentence true?

$$243 \square 9 = 27$$

- A. +
 - B. -
 - C. ×
 - D. ÷
-

5. Which garden has the MOST apples?



- A. Garden A
 - B. Garden B
 - C. Garden C
 - D. Garden D
-

Name: _____

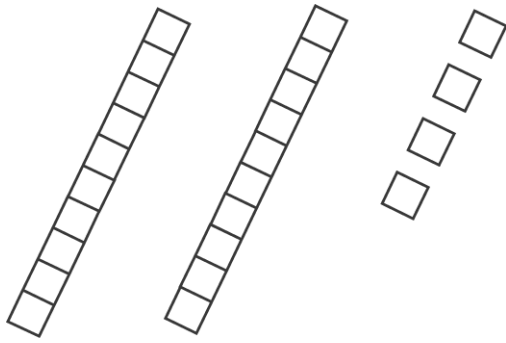
Test: Math - 4th grade Practice T

Date: _____

Teacher: Suzy Skelton

6. Ira earns money by walking his neighbor's dog. He earns the same amount of money each day. After 25 days, he has earned \$75. What should you do to find out how much money he earned each day?
- A. add
 - B. subtract
 - C. multiply
 - D. divide
-

7. The following base ten blocks show what decimal number?




- A. 0.24
 - B. 0.5
 - C. 0.52
 - D. 0.7
-





Name: _____

Test: Math - 4th grade Practice T

Date: _____

Teacher: Suzy Skelton

8. Which shape is the same size and shape as ?

- A. 
- B. 
- C. 
- D. 

9. Which is the same as

$$2,000+900+30+8?$$

- A. 2,938
- B. 29,308
- C. 290,038
- D. 2,000,900,308

10. Which of the following are prime numbers whose sum is 9?

- A. $9 + 1$
 - B. $3 + 6$
 - C. $4 + 5$
 - D. $2 + 7$
-

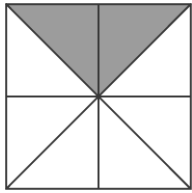
Name: _____

Test: Math - 4th grade Practice T

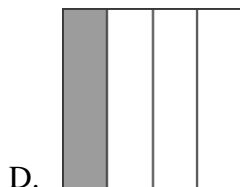
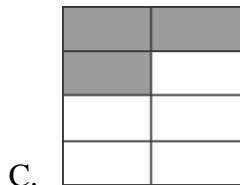
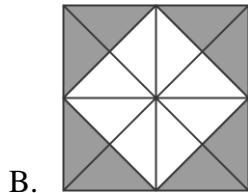
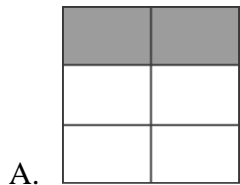
Date: _____

Teacher: Suzy Skelton

11. Look at the picture below.



Which of the following shows the same fraction shaded?



Name: _____

Test: Math - 4th grade Practice T

Date: _____

Teacher: Suzy Skelton

12. Find the quotient.

$$\overline{3)495}$$

- A. 131 R2
 - B. 135
 - C. 165
 - D. 171 R2
-

13. Round to the nearest ten.

743

- A. 700
 - B. 740
 - C. 800
 - D. 840
-

14. What decimal is shown by the shaded part of this model?



- A. 0.04
 - B. 0.4
 - C. 4.0
 - D. 40.0
-

Name: _____

Test: Math - 4th grade Practice T

Date: _____

Teacher: Suzy Skelton

15. Ms. Calvin is playing a “Guess My Rule” game with her students. When a student says a number, she says another number which she finds by using her rule.

Student's Numbers	Ms. Calvin's Responses
16	9
10	3
13	6
9	2

What is Ms. Calvin's rule?

- A. add 7
 - B. subtract 7
 - C. add 8
 - D. subtract 8
-

16. A 36 inch board is cut into 9 equal parts. How wide is each part?

- A. 3 inches
 - B. 4 inches
 - C. 12 inches
 - D. 13 inches
-

Name: _____

Test: Math - 4th grade Practice T

Date: _____

Teacher: Suzy Skelton

17. What are these?

Class	Students in the Class
First Grade	21
Second Grade	23
Third Grade	19
Fourth Grade	17

- A. circles
 - B. cones
 - C. cubes
 - D. cylinders
-

18. Which symbol belongs in the ?

$$2 \times 9 \quad \square \quad 6 \times 3$$

- A. >
 - B. <
 - C. =
 - D. \neq
-

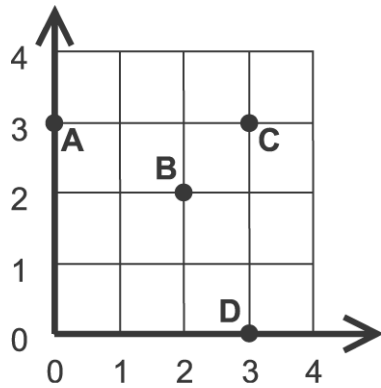
Name: _____

Test: Math - 4th grade Practice T

Date: _____

Teacher: Suzy Skelton

19. What letter names the point located by (0, 3)?



- A. A
 - B. B
 - C. C
 - D. D
-

20. Find the quotient.

$$3 \overline{)495}$$

- A. 131 R2
 - B. 135
 - C. 165
 - D. 171 R2
-

Name: _____

Test: Math - 4th grade Practice T

Date: _____

Teacher: Suzy Skelton

21. How much liquid is in the container?



- A. $\frac{3}{4}$ cup
 - B. $1\frac{1}{4}$ cups
 - C. $1\frac{3}{4}$ cups
 - D. 2 cups
-

22. Which equation shows the associative property of addition?

- A. $3 + (2 + 1) = 2 + (2 + 2)$
 - B. $4 + (6 + 7) = (4 + 6) + 7$
 - C. $9 + (1 + 5) = (7 + 8) + 0$
 - D. $8 + (2 + 4) = 7 + (5 + 2)$
-

23. Which fraction is the smallest?

- A. $\frac{1}{8}$
 - B. $\frac{3}{8}$
 - C. $\frac{5}{8}$
 - D. $\frac{7}{8}$
-

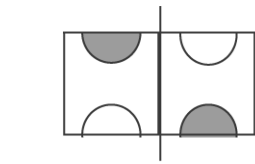
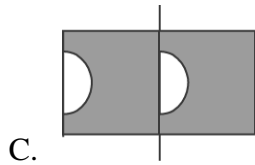
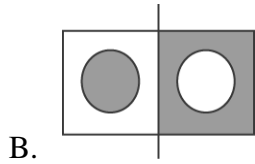
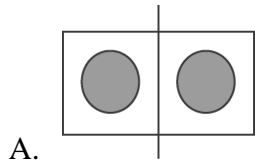
Name: _____

Test: Math - 4th grade Practice T

Date: _____

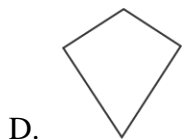
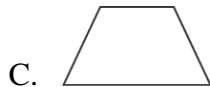
Teacher: Suzy Skelton

24. Which of the following pictures is symmetrical with respect to the line dividing it?



D.

25. Which is a quadrilateral with two parallel sides?



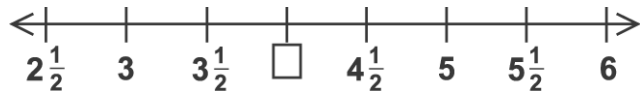
Name: _____

Test: Math - 4th grade Practice T

Date: _____

Teacher: Suzy Skelton


26. What is the missing number on the number line?



- A. 4
 - B. $4\frac{1}{2}$
 - C. 5
 - D. $5\frac{1}{2}$
-

27. Add.

$$\frac{3}{6} + \frac{2}{6} =$$



- A. $\frac{1}{6}$
 - B. $\frac{5}{6}$
 - C. $\frac{5}{12}$
 - D. $\frac{6}{12}$
-

28. The movie theatre sold 473 boxes of popcorn at the first show and 759 boxes at the second show. How many boxes of popcorn were sold altogether?

- A. 286
 - B. 1,133
 - C. 1,222
 - D. 1,232
-

Name: _____

Test: Math - 4th grade Practice T

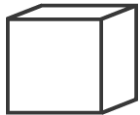
Date: _____

Teacher: Suzy Skelton

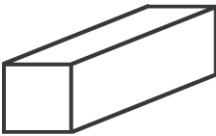
29. Tonya is saving money for a new bike. On the first day, she saved \$1.00. On the second day, she saved \$2.00 more than the first day. On the third day, she saved \$2.00 more than on the second day. If she continues to save \$2.00 more than the previous day, how much will she save on the seventh day?

- A. \$12.00
 - B. \$13.00
 - C. \$14.00
 - D. \$15.00
-

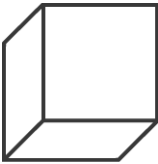
30. Match.



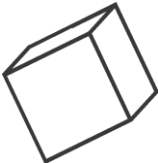
A.



B.



C.



D.

