

Georgia
CRCT
online



1st Grade Math Practice Test

First Grade Mathematics
Test

Suzy Skelton

Name: _____

Date: _____

Instructions:

Name: _____

Test: 1st Grade Math Practice Te

Date: _____

Teacher: Suzy Skelton

Look at Jill, Kim, and Beth.



Jill

Kim

Beth

1. Which girl is tallest?

- A. Jill
 - B. Kim
 - C. Beth
-

Name: _____

Test: 1st Grade Math Practice Te

Date: _____

Teacher: Suzy Skelton

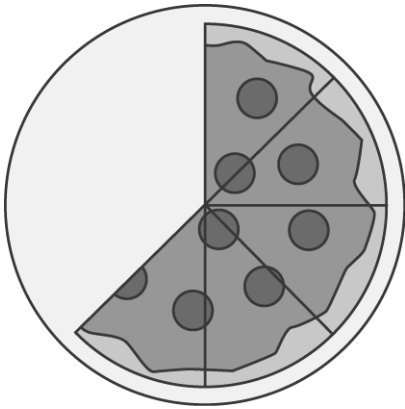
Mark has the nickels shown below.



2. Mark is going to trade all of his nickels for pennies. How many pennies should he get?

- A. 20
 - B. 25
 - C. 40
-

The pizza below had 8 slices.



3. How many slices are gone?

- A. 2
 - B. 3
 - C. 4
-

Name: _____

Test: 1st Grade Math Practice Te

Date: _____

Teacher: Suzy Skelton

4. Subtract.

$$\begin{array}{r} 50 \\ - 20 \\ \hline \end{array}$$

- A. 20
 - B. 30
 - C. 40
-

5. Which equals the same value as $3 + 4$?

- A. $8 - 1$
 - B. $5 + 6$
 - C. $9 - 4$
-

6. Harry made 11 points in the game. Jose made 3 more points than Harry. How many points did Jose make?


- A. 8
 - B. 13
 - C. 14
-





Name: _____

Test: 1st Grade Math Practice Te

Date: _____

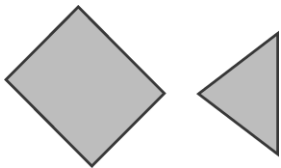
Teacher: Suzy Skelton

7. Which numbers are covered by the s in the box below?

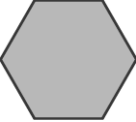


1	2		4	5
		8		
11			14	

- A. 5, 6, 10, 15
 - B. 3, 6, 9, 12
 - C. 4, 8, 12, 15
-

Look at the shapes below.



8. Which picture shows a way that the two shapes can be moved together?

- A. 
- B. 
- C. 

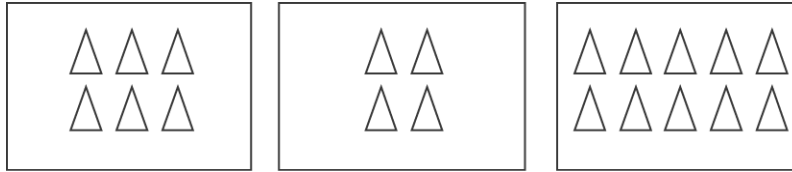
Name: _____

Test: 1st Grade Math Practice Te

Date: _____

Teacher: Suzy Skelton


Look at these pictures below.



9. Which pair of number sentences could describe these pictures?

- A. $4 + 6 = 10$ and $4 - 2 = 2$
- B. $6 + 4 = 10$ and $6 - 4 = 2$
- C. $6 + 4 = 10$ and $4 + 6 = 10$

There are 3 people in front of Lisa in line.



10. In what place is Lisa in line?

- A. 5th
- B. 3rd
- C. 4th

Name: _____

Test: 1st Grade Math Practice Te

Date: _____

Teacher: Suzy Skelton

11. Which number comes next in the pattern below?

2, 2, 5, 5, 3, 2, 2, 5, ____

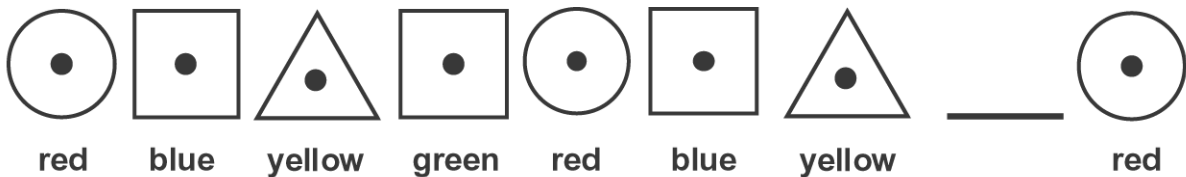
- A. 2
 - B. 3
 - C. 5
-

12. Look at the numbers in the boxes. When counting by ones, what number belongs in the empty box?

4		6	7
---	--	---	---

- A. 1
 - B. 3
 - C. 5
-

13. Lilly is making an art project with the following buttons. Which button is she missing?



- A. blue square
 - B. yellow triangle
 - C. green square
-


Name: _____

Test: 1st Grade Math Practice Te

Date: _____

Teacher: Suzy Skelton

14. Which does NOT belong with the others?



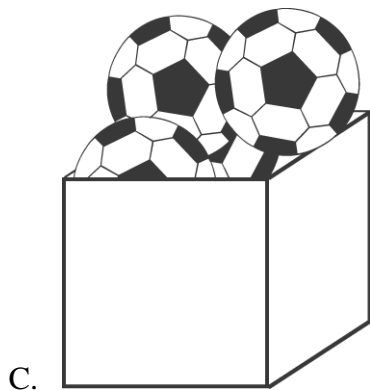
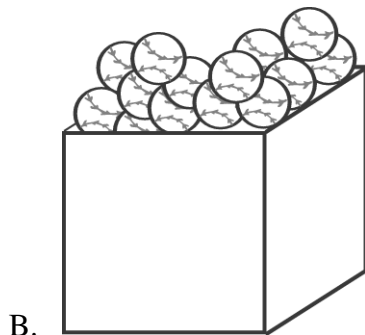
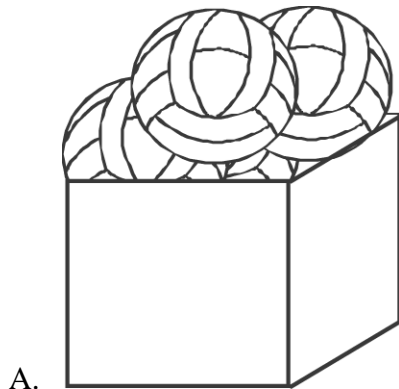
Name: _____

Test: 1st Grade Math Practice Te

Date: _____

Teacher: Suzy Skelton

15. Look at the balls below. Which box does the following ball go into?



Name: _____

Test: 1st Grade Math Practice Te

Date: _____

Teacher: Suzy Skelton

16. How much money is shown below?



- A. 35¢
 - B. 37¢
 - C. 47¢
-

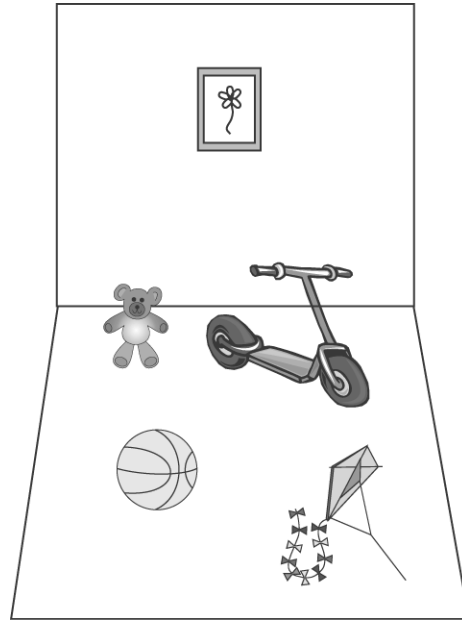
Name: _____

Test: 1st Grade Math Practice Te

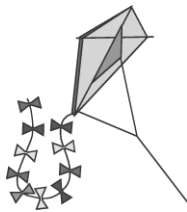
Date: _____

Teacher: Suzy Skelton

Look at the pictures of the toys below.



17. Which toy is closest to the teddy bear?



Name: _____

Test: 1st Grade Math Practice Te

Date: _____

Teacher: Suzy Skelton

18. Which of these equals 12?

- A. $4 + 4$
 - B. $8 + 8$
 - C. $6 + 6$
-

Look at the pattern below.



19. Which picture belongs in the pattern?

- A.
 - B.
 - C.
-

20. Add.

$$\begin{array}{r} 8 \\ 1 \\ + 0 \\ \hline \end{array}$$

- A. 9
 - B. 10
 - C. 19
-

21. What number goes in the box?

$$6 + \square = 9$$

- A. 1
 - B. 2
 - C. 3
-

Name: _____

Test: 1st Grade Math Practice Te

Date: _____

Teacher: Suzy Skelton

22. Tabitha had 7 throws in the game. She had 3 hits. How many more throws than hits did Tabitha have?

- A. 3
 - B. 4
 - C. 10
-

Use the list below to answer question 23

There are 6 monkeys.


There are 3 elephants.

There are 5 bears.

23. How many monkeys and elephants are there in all?

- A. 9
 - B. 11
 - C. 14
-

24. Look at these animals.



What part of the animals are birds?

- A. $\frac{1}{2}$
 - B. $\frac{1}{4}$
 - C. 1
-

Name: _____

Test: 1st Grade Math Practice Te

Date: _____

Teacher: Suzy Skelton

Ronnie is thinking of a number. The number is 20 more than 40.

25. Which number is Ronnie thinking of?


- A. 20
 - B. 60
 - C. 70
-

26. Solve.

$$8 - 6 = \square$$

- A. 4
 - B. 3
 - C. 2
-

27. What comes next in the pattern below?



- A.
- B.
- C.

Name: _____

Test: 1st Grade Math Practice Te

Date: _____

Teacher: Suzy Skelton

28. Which number means four tens and five ones?

- A. 45
 - B. 51
 - C. 54
-




29. Which number sentence is the same as 18?

- A. $9 + 8 + 0$
 - B. $7 + 2 + 7$
 - C. $6 + 6 + 6$
-

30. Look at the set of things below.



Which of these would also go in the set?

- A. 
 - B. 
 - C. 
-