

Today we shall review what you remember about Georgia Geography, the Early Americans, the Colony of Georgia, and The Revolutionary War. Lets see what you know.



**Georgia
Studies**

If an individual wants to “act a fool” they will be separated from the group and have to complete an assignment on their own

1. The class should be divided into teams
2. Each team should elect a leader
3. The leader is both the scribe and the representative.
4. After a question is shown groups can discuss amongst themselves and select an answer.
5. When time is called leaders will show the teacher their answer.



Geography

Native Americans


Individuals

Colonial Georgia

Revolutionary War

Quick Review Game

The Alternative



INDIVIDUALS

1

2

3

4

5

6

7

8

9

10

11

RETURN
HOME



Geography

1

2

3

4

5

6

7

8

9

10

A blue circular arrow icon pointing clockwise, with the text "RETURN HOME" centered inside it.

RETURN
HOME

Native Americans

1

2

3

4

5

6

7

8

9

10

A circular blue button with a white arrow pointing clockwise, containing the text "RETURN HOME".

RETURN
HOME

Revolutionary War

1

2

3

4

5

6

7

8

9

10

A blue circular arrow icon pointing clockwise, with the text "RETURN HOME" centered inside it.

RETURN
HOME

Colonial Georgia

1

2

3

4

5

6

7


8

9

10

RETURN
HOME

The Alternative



- The class has three chances. If three major misbehaviors occur we will all do the alternative assignment. Define each of the words listed on the hand out. Three complete sentences each. Use the book to check answers. This will be taken up at the end of class and assessed later.



**This individual was the King
of England during the
Establishment of Georgia.
Hint Georgia is named after
him.**



King George II



This individual is called the founder of Georgia. He was able to establish it, he designed the city of Savannah, and made peaceful relationships with the Native Americans



James
Oglethorpe



- Individuals

This individual acted as a spy for the Patriots and killed some Loyalist soldiers in her own home.

Nancy Hart



- Individuals

This individual was a slave that fought at the Battle of Kettle Creek. He was given land later as a reward for his services.



Austin Dabney



This individual translated for the Georgia Colonists and Yamacraw Native Americans.



This individual created the Proclamation of 1763 and ruled England during the American Revolution.



King
George
III



This Native American chief became friends with James Oglethorpe. They developed a strong relationship over time.



Tomochichi



What did Button Gwinnett, Lyman Hall, George Walton do during the Revolutionary War?

They Represented Georgia and signed the Declaration of Independence



**This is the term for the group
of people who fought for the
King during the
Revolutionary War.**



Loyalists or Tories



This is the term for the group of rebels that fought for their independence.



Patriots



**This individual lead the Patriot forces
against the British at the Battle of Kettle
Creek.**



**Elijah
Clarke**



This group of people convinced King George II to create a new colony. Hint they were lead by Oglethorpe



Trustees



**What were the four reasons
for the establishment of
Georgia? The Four P's:**



Production
Protestants
Protection
Poor



**What official document
allowed Oglethorpe to
establish this colony?**



Charter of 1732



Name one of the Countries that Georgia was expected to protect the other British colonies from.



**Spanish and
French**



**Name one Asian product that
the early Georgian colonists
were expected to grow.**



**Silk, Rice, or
Indigo**



Why would King George II allow so many Protestants to settle in Georgia while Catholics were not allowed in at all? Hint what was happening to these Protestants?



They were being kicked out of their countries by the Catholics



Why would Oglethorpe want to allow all these poor people into this new colony?

They were in debtors prison.



What was the first city built in Georgia by the British? This port city is known for bringing in most of the Southeast's goods



City of Savannah



When Georgia transitions from a Trustees' Colony into a Royal colony three major factors change. Which period is known for having slaves?



Royal



When Georgia transitions from a Trustees' Colony into a Royal colony three major factors change. Which period is known for issuing more equal plots of land?



Trustees



Rearrange these Native Americans
Cultural Periods in the correct order:
Woodland, Paleo, Mississippian,
Archaic



Paleo
Archaic
Woodland
Mississippian



This group of Native Americans developed the bow and Arrow. They also developed Agriculture.



Woodland



This native American period can be classified by the end of the Ice Age. They had to hunt and gather in order to survive.



Archaic



This was the most advanced of the Native Americans period. This groups of Native Americans met the Europeans and died from Old World diseases.



Mississippian



This was a primitive tool used to hunt Mammoths. It was developed before the bow and arrow.



Atlatl



This group of Native Americans ate Mammoth and lived during the Ice Age .



Paleo



What was the Name of the disease that many of the Native Americans died from. How did they get this disease?



Smallpox and
the Europeans



Who won the French and Indian War
and what did they win?

The British won all
the French owned
land east of the
Mississippi.



Which one of these things would be taxed under the Stamp Act?:

- a. Sugar / Molasses
- b. All non British Tea
- c. A letter opener
- d. A commercial contract
- e. Paint and oil products



A commercial
contract



What famous act occurred in response to the taxation of Tea?



Boston Tea Party



Nancy Hart was an important female that had a impact on the Revolutionary War. What did she do?



Spy and stone cold killer. Aka ninja warrior princess



What were the names of the three Georgians that signed the Declaration of Independence? Last names will do, one point each.



Gwinnett, Hall,
Walton



After winning the war the British gain land French owned land east of the Mississippi River. In order to prevent another possible war the king made an official decree that prevented the colonists from moving west of a certain line. What is the name of this decree?



The Proclamation
of 1763



What geographic feature could the colonists not cross according to the Proclamation of 1763?



The Appalachian Mountains.



After winning the war the British gain land French owned land east of the Mississippi River. In order to prevent another possible war the king made an official decree that prevented the colonists from moving west of a certain line. What is the name of this decree?



The Proclamation
of 1763

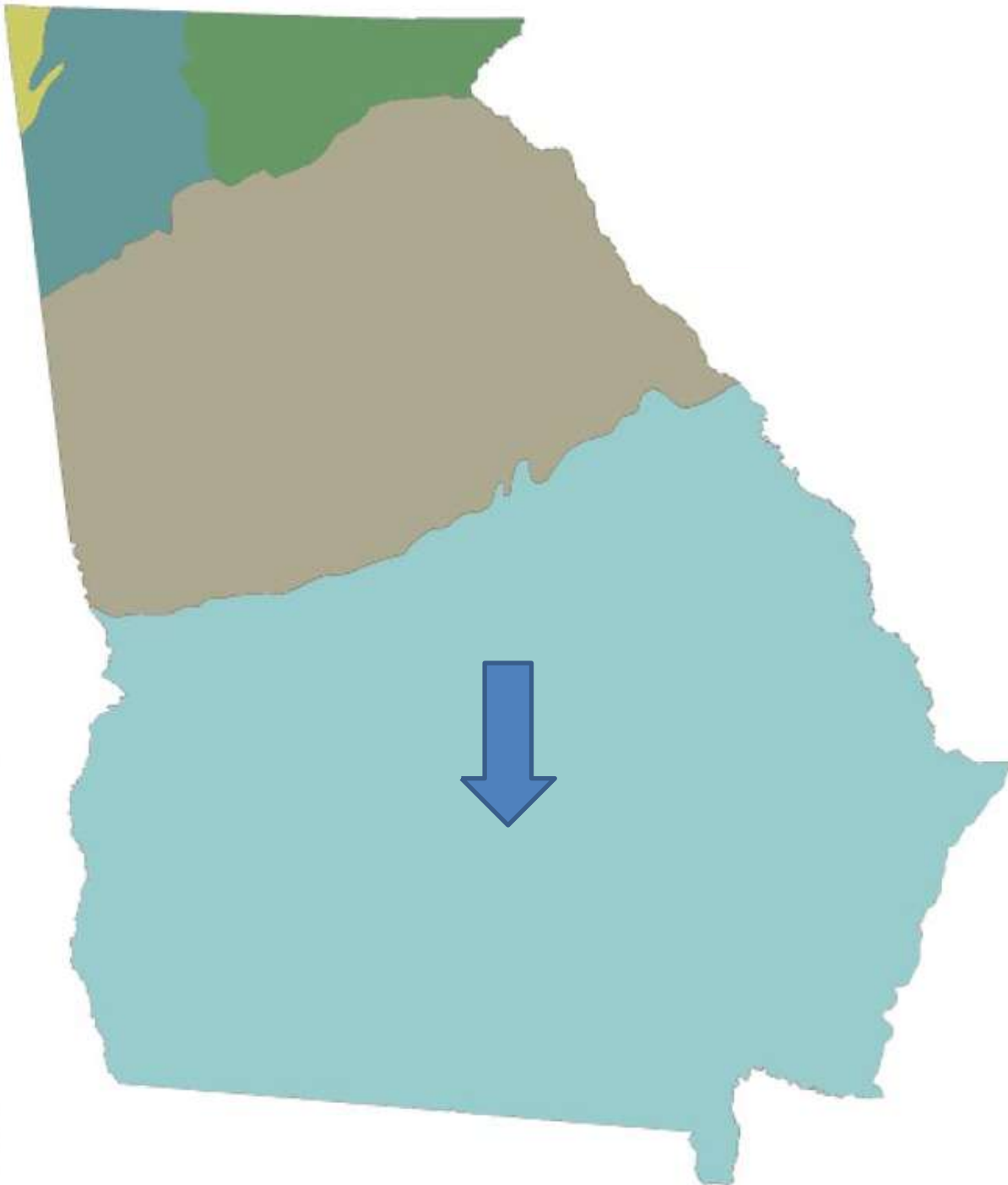


This Document was created by Thomas Jefferson.
It suggests that the colonists should form their
own nation free from British rule.



Declaration of Independence

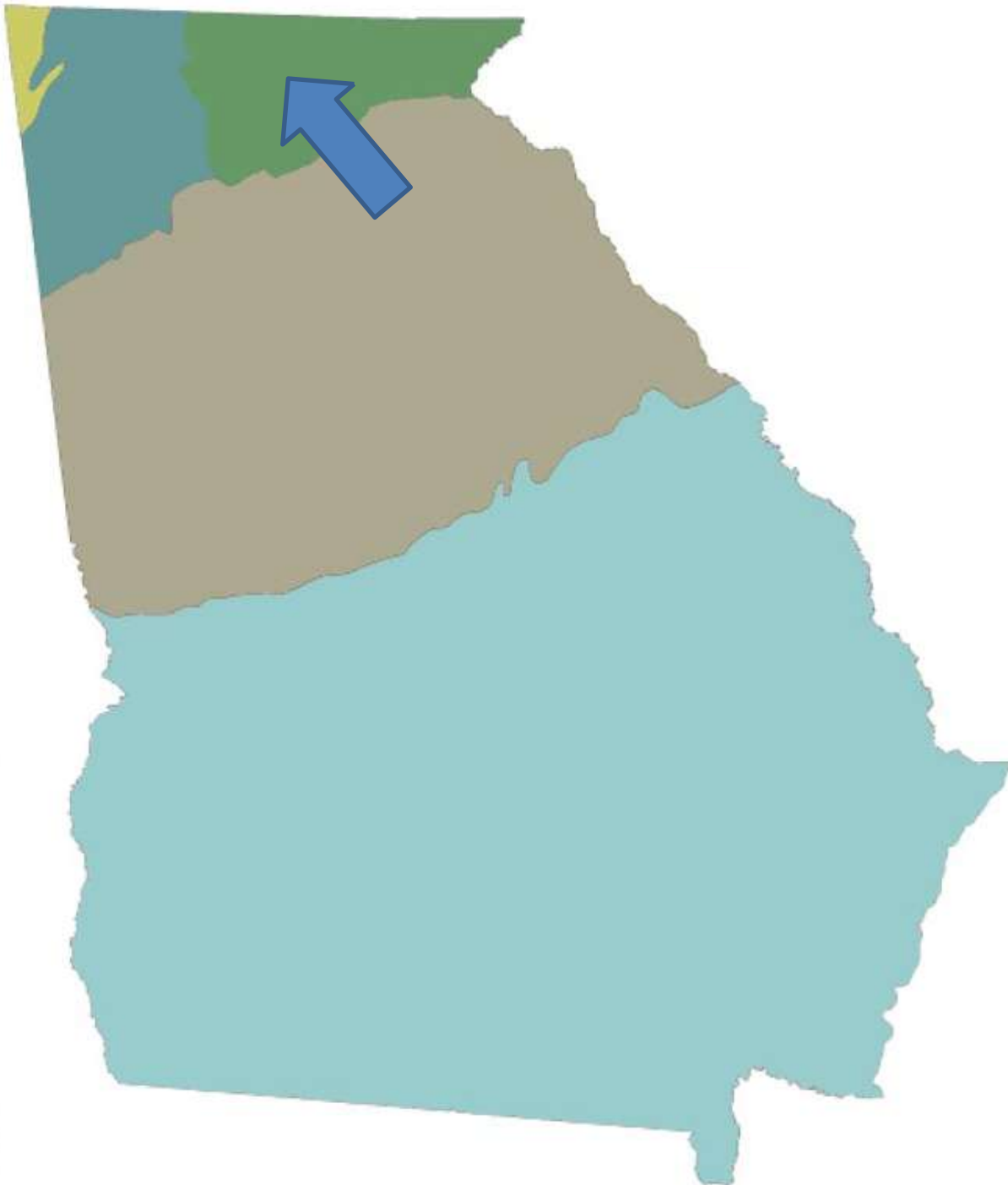




What
Geographi
c Region
is labeled
below?

Coastal
Plains

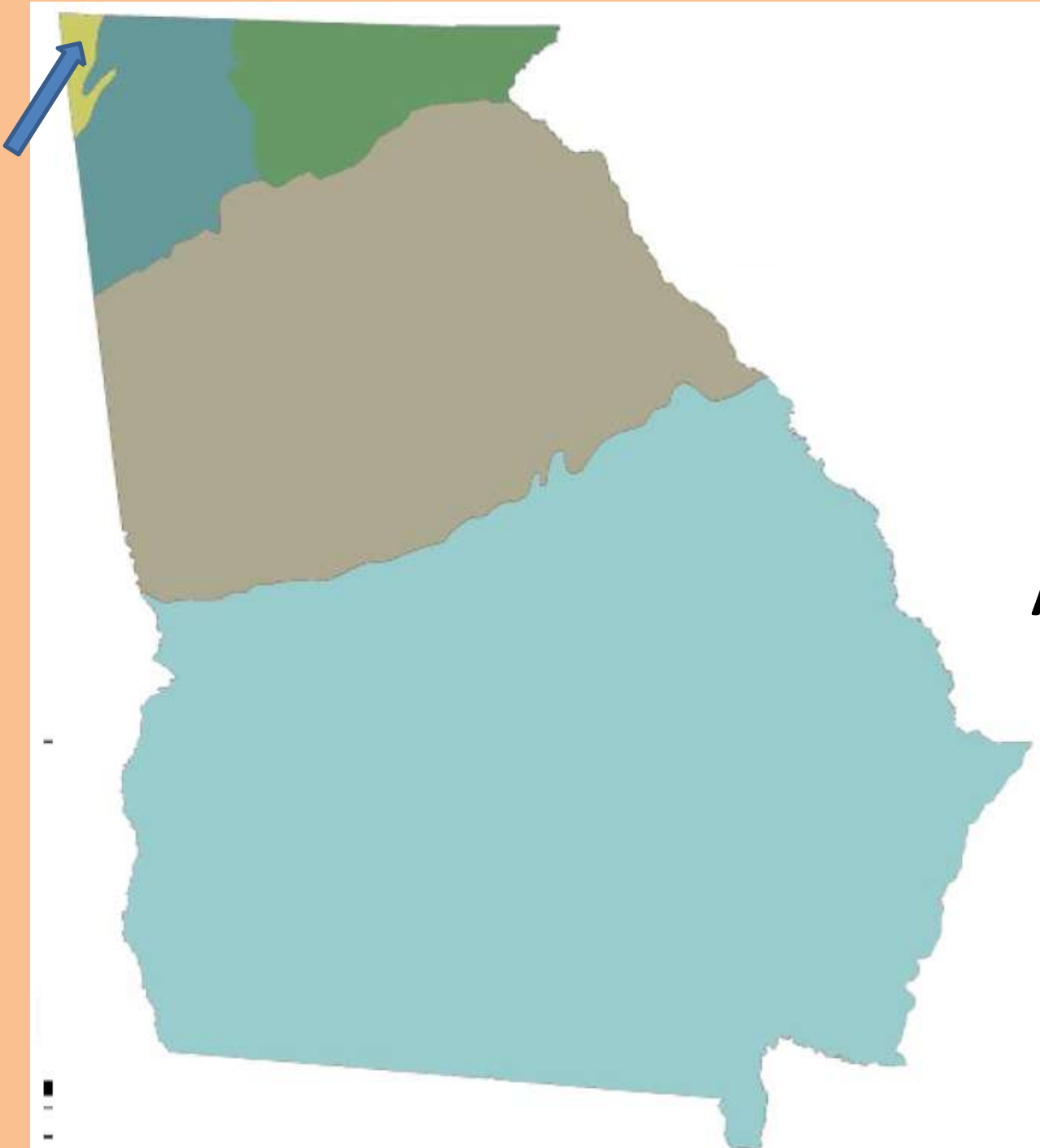




What
Geographic Regions
labeled
below?

Blue Ridge
Mountains

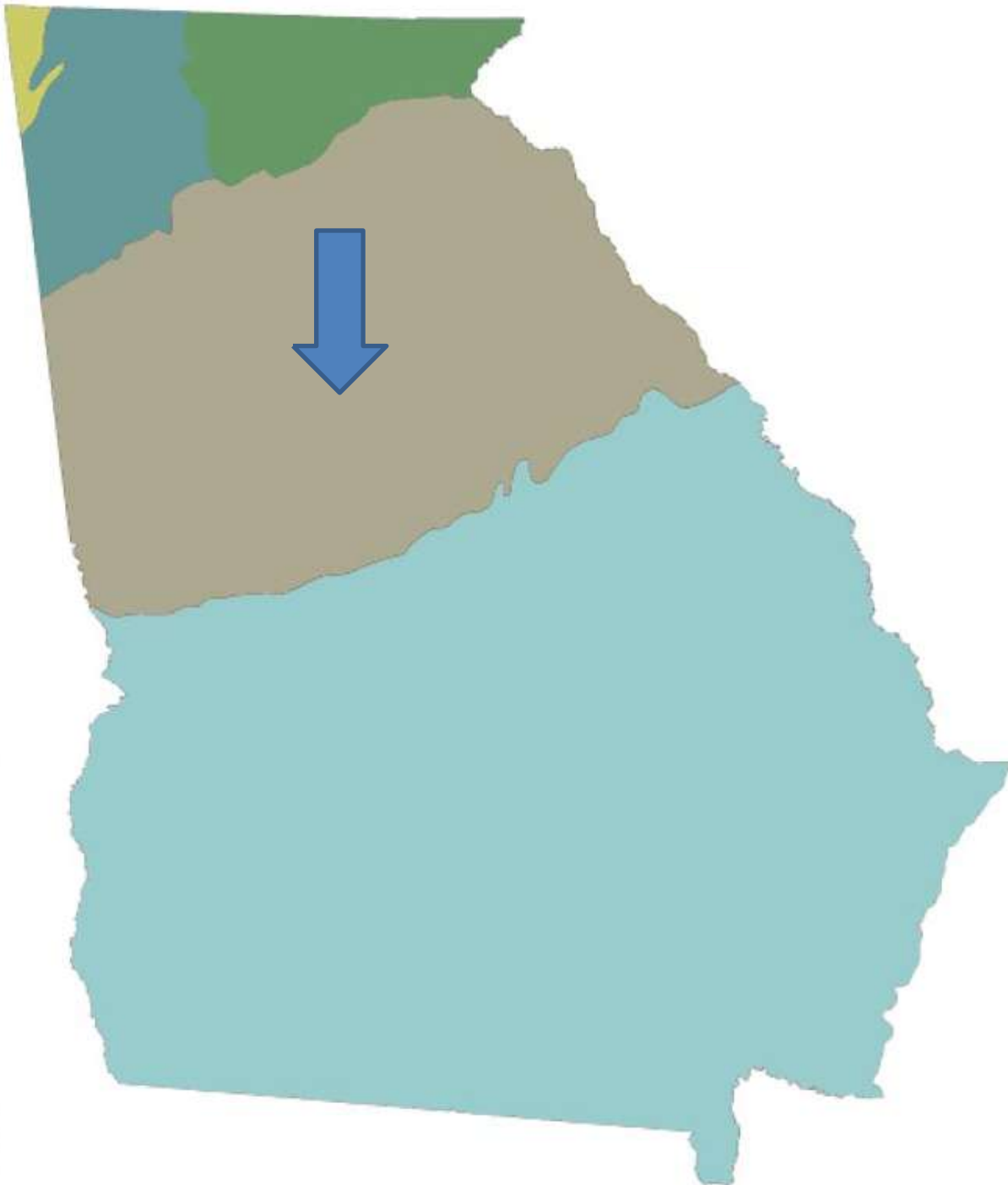




What
Geographi
c Region
is labeled
below?

Appalachian
Mountains

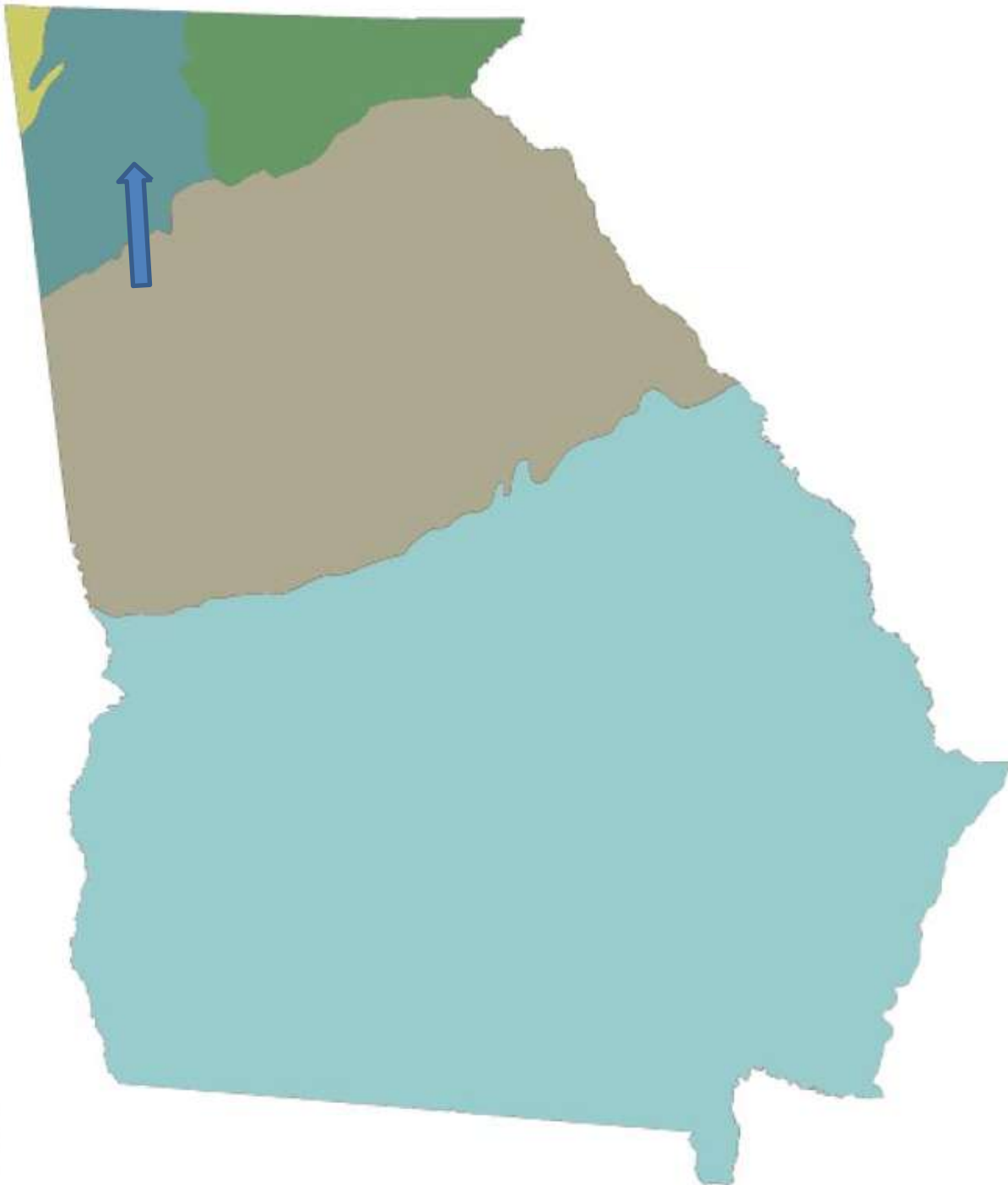




What
Geographic
Feature
is labeled
below?

Piedmont





What
Geographic Region
is labeled
below?

Valley and
Ridge



What
Geographic
Feature
is labeled
below?



Barrier
Islands



What
Geographic
Feature
is labeled
below?



Appalachian
Mountains

RETURN
HOME

NEXT

What
Geographic
Feature
is labeled
below?

A map of the state of Georgia is shown. A blue arrow points down to a diagonal line that runs from the northwest to the southeast, representing the Fall Line. The text "Fall Line" is written in black below the arrow.

Fall Line

RETURN
HOME

NEXT

What
Geographic
Feature
is labeled
below?



Okefenokee
Swamp

The image shows a map of the state of Florida. A blue line points from the text 'Okefenokee Swamp' to a specific area in the northern part of the state. A blue arrow points to the southern part of the state. The map is outlined in black and shows some internal boundaries.

RETURN
HOME

NEXT

What
River is
labeled
below?



Chattahoochee

RETUR
N
HOME

NEXT

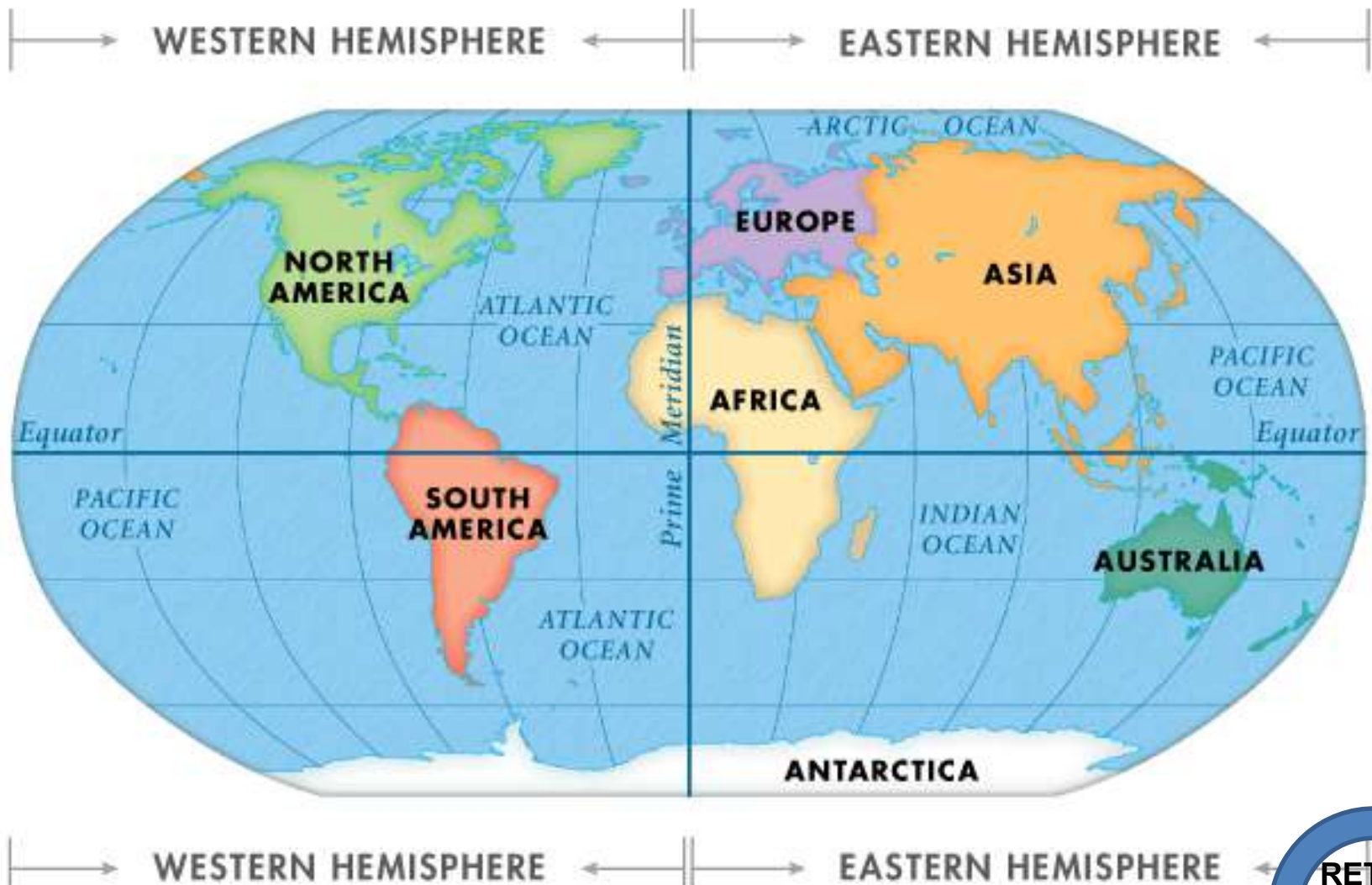
What
River is
labeled
below?

A map of the state of Georgia is shown. A blue arrow points from the text 'Savannah River' to a specific location on the eastern border of the state. Another blue arrow points from that location towards the Atlantic Ocean.

Savannah River

RETUR
N
HOME

NEXT



What Hemisphere would you find Georgia?

Northern or Western (never Northwestern)

RETURN HOME

NEXT



North America

What
Continent is
Georgia
located in?





United States

What Country does Georgia belong to?






The South

What Region of the USA is Georgia in?



Quick Review Game



1. The Truman Doctrine claims that America should aid European Nations resist the spread of Communism.



1. Jonathan Edwards spread Christianity across the colonies by preaching a “fire and brimstone” styled message to those who were placing more emphasis on worldly things instead of their salvation.
2. What was this religious movement called?

The Great Awakening



Name the three individuals from left to right.



This defense alliance was created because the U.S and eleven other nations saw the Berlin Blockade as an act of Soviet aggression.

NATO



CAPITALISM/DEMOCRACY

COMMUNISM/TOTALTARIANISM



THE COLD WAR



SSUSH20 a, b, c, and e
SSUSH21 a, b, c, and c
SSUSH22 a and b