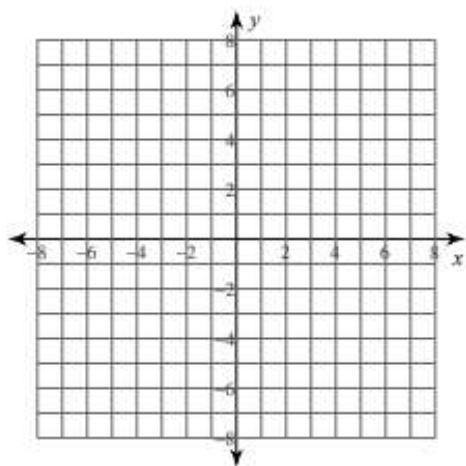


## Algebra II

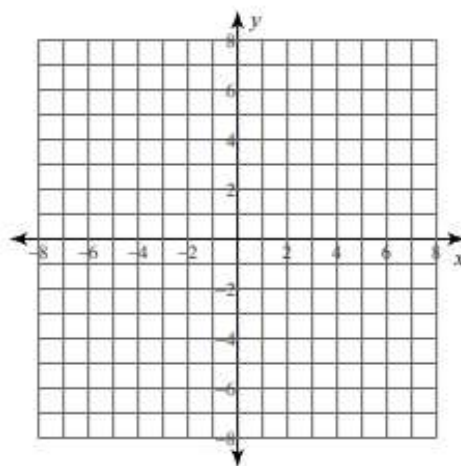
### Formative Ticket # 17

#### Graphing Simple Square Root Functions

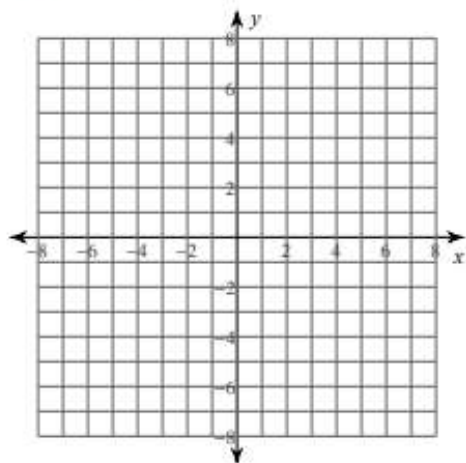
3)  $y = 2\sqrt{x+2} - 3$



4)  $y = 3\sqrt{x}$



5)  $y = \sqrt{x-1}$



6)  $y = \sqrt{x} + 3$

