
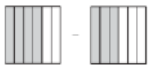





June Math Calendar- 4th Grade





Monday	Tuesday	Wednesday	Thursday	Friday
1 Multiply: $6 \times 7 =$	2 Alison has a sticker that is a quadrilateral with 2 pairs of parallel sides, four equal sides, and no right angles. Classify the quadrilateral.	3 Find the sum. $2\frac{3}{4} + 3\frac{3}{4} + 6\frac{1}{4}$	4 Which is not a factor of 60? 3 14 30 4	5 Look at the pattern below. What is the rule of the pattern? 12, 15, 14, 17, 16
8 Name all of the factors of 27.	9 Multiply $3,624 \times 7$ using an array or area model.	10 Add $34,942 + 7,379$	11 48,900 What is 1,000 less than the number above?	12 What is the value of the underlined digit? <u>7</u> 2,887
15 Subtract $20,003 - 6,287$	16 What is the quotient of $67 \div 5$?	17 Tell if the number is prime or composite. 23 44	18 Write an equation to represent the shaded parts. 	19 Write a fraction that is equivalent to $\frac{1}{3}$.
22 John made boxes of cinnamon buns for his bakery. Each box contains 9 buns. If he made 254 boxes of cinnamon buns, how many buns will his bakery sell if he sells them all?	23 Solve and write the answer in fraction form. 	24 Name two common multiples of 3 and 4.	25 The area of a rectangular shed floor is 15 square feet. The length of the floor is five feet. What is the width?	26 Multiply $9 \times 8 =$
29 Matt wants to tile his living room. His living room is 15 feet long and 9 feet wide. How much tile does he need to tile his living room?	30 Which sides are perpendicular to \overline{ST} ? 			



July Math Calendar- 4th Grade



Monday	Tuesday	Wednesday	Thursday	Friday
		1 An expression is shown. $30,000 \div 300$ What is the value of the expression?	2 Write a fraction that is equivalent to $\frac{1}{4}$	3 Use $<$, $>$, or $=$ to compare each set of decimals. 0.53 ___ 0.35 0.03 ___ 0.30
6 Divide $56 \div 7 =$	7 What is the value of the underlined digit? $4\underline{5}6,022$	8 If McDonald's is selling big macs for \$1.59 each. How many could you buy with \$10?	9 Multiply $7 \times 8 =$	10 A flag hangs on the front porch of a house. What is the measure of the unknown angle? 
13 There are 62 students who want to play in the Football League. Each team needs exactly 6 people to be full. How many full teams can be made for the Football League?	14 Solve $3 \times \frac{3}{10} =$	15 Tom has 8 children. If he divides his land equally into 10 sections and gives each of his children one section, what fraction remains for himself?	16 Solve $234,476$ $+456,789$	17 Circle the term that relates to the statement: I have only one pair of parallel sides. Trapezoid Rhombus Parallelogram
20 $615,420$ What is 1,000 more than the number above?	21 Multiply $12 \times 5 =$	22 Attie is 6 feet tall which is 3 times taller than her son Leo. How tall is Leo?	23 What is the value of the underlined digit? $1\underline{0}7,546$	24 What is the perimeter? 
27 Solve $345,768$ $-\underline{203,989}$	28 Tara's garden has a perimeter of 32 feet. Draw a rectangle that could represent the garden.	29 178 Multiply by 7 , add 10	30	31

