


Read the sentences and answer the questions.

Sandra picked 12 flowers. She gave 5 of them to Nancy.



1. How many flowers did Sandra pick? _____
2. How many flowers did Sandra have left? _____
3. How many flowers did Sandra give to Nancy? _____
4. If Nancy picks 3 more flowers, how many will she have then? _____

Jim has 3 gray cats, 2 white cats, and 4 black cats.




1. How many cats does Jim have in all? _____
2. If Jim had 2 more white cats, how many white cats would he have in all? _____
3. If Jim gives away 3 cats, how many cats will he have left? _____
4. How many more black cats than gray cats does Jim have? _____

Answer Key

Name: _____ Date: _____


Read the sentences and answer the questions.

Sandra picked 12 flowers. She gave 5 of them to Nancy.



- How many flowers did Sandra pick? 12
- How many flowers did Sandra have left? 7
- How many flowers did Sandra give to Nancy? 5
- If Nancy picks 3 more flowers, how many will she have then? 8

Jim has 3 gray cats, 2 white cats, and 4 black cats.



- How many cats does Jim have in all? 9
- If Jim had 2 more white cats, how many white cats would he have in all? 4
- If Jim gave away 2 cats, how many cats will he have left? 6
- How many more black cats than gray cats does Jim have? 1

Copyright © Pearson Education, Inc. 28 11-0104 First Grade Basic Skills Math and Reading Workbook