




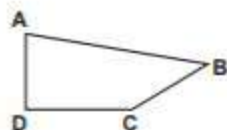
# MINUTE 12



1. About how many commercials might have been shown this year during the Super Bowl?

a. 4                      b. 40                      c. 400

2. Which letter on the shape is beside an obtuse angle? \_\_\_\_\_



3. Which of the following groups of numbers is in order from least to greatest?

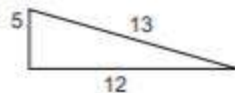
a. 0.312, 0.411, 0.601, 0.806                      b. 10.8, 10.6, 31.7, 40.4  
c. 0.88, 0.84, 0.76, 0.49                      d. 5.00, 3.19, 1.98, 0.755

4. If  $\frac{1}{4} = \frac{x}{8}$ , then  $x =$  \_\_\_\_\_.

5. Anna finished a race five yards ahead of Jack. Jack finished nine yards ahead of Tina. How many yards ahead of Tina was Anna? \_\_\_\_\_

6. Forty tickets were sold for a lottery. If Lon bought two tickets, what are the chances he will win? \_\_\_\_\_

7. What is the perimeter of the triangle? \_\_\_\_\_



8. How many glasses of lemonade did Rhonda sell? \_\_\_\_\_

Glasses of Lemonade Sold

Justin	😊	😊	😊	😊	
Leah	😊	😊			
Rhonda	😊	😊	😊		
Candice	😊				

Each 😊 = 10 glasses.

9. 
$$\begin{array}{r} 2.6 \\ + 3.2 \\ \hline \end{array}$$

$$\begin{array}{r} 3.8 \\ + 4.5 \\ \hline \end{array}$$

10. 
$$\begin{array}{r} 5.6 \\ \times 10 \\ \hline \end{array}$$

$$\begin{array}{r} 6.3 \\ \times 10 \\ \hline \end{array}$$

NAME: \_\_\_\_\_

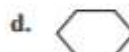


# MINUTE 11



1. Circle the number with a 4 in the thousands place. 324 421 4,321 49

2. Which of these shapes is a hexagon?



3. Which of the following is NOT equal to 40?

a.  $4 \times 8 + 8$

b.  $2 \times 2 \times 5$

c.  $10 + (5)(6)$

4. Put the fractions in order from least to greatest  $\frac{3}{8}, \frac{7}{8}, \frac{2}{8}, \frac{8}{8}$  \_\_\_\_\_.

5. If  $\frac{42}{x} = 7$ , then  $x =$  \_\_\_\_\_.

6. Complete the pattern: 12, 15, 17, 20, 22, 25, \_\_\_\_\_.

7. How many cubes would three layers of this shape have? \_\_\_\_\_

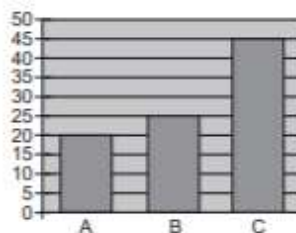


8. According to the graph to the right:

A = \_\_\_\_\_

B = \_\_\_\_\_

C = \_\_\_\_\_



9.  $9 \cdot 7 =$

$8 \cdot 8 =$

$6 \cdot 7 =$

10.  $3 + 5 + 7 =$


$4 + 7 + 6 =$





$2 + 9 + 8 =$

NAME: \_\_\_\_\_



# MINUTE 10



1. Which of the following numbers is NOT equal to 36?  
 a.  $4 \times 9$       b.  $18 + 18$       c.  $40 - 6$       d.  $10 + 10 + 10 + 6$
2. Which one of these shapes has four vertices (corners)?  
 a.       b.       c.       d. 
3. Which of the following groups of numbers is in order from greatest to least?  
 a. 323, 411, 421, 506      b. 108, 106, 217, 304  
 c. 98, 94, 36, 29      d. 200, 199, 198, 405

4. Complete the chart.

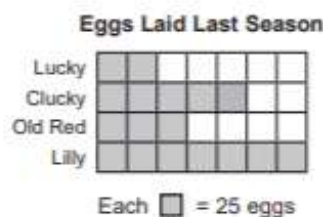
Add 0.4	
Start	End
2.2	2.6
3.1	
4.7	

5.  $28 \div \square = 7$
6. Complete the pattern:  $\frac{1}{3}, \frac{2}{5}, \frac{3}{7}, \underline{\hspace{1cm}}$
7. Which shape has the greater perimeter?  
 \_\_\_\_\_



For Problems 8–9, use the bar graph to the right.

8. How many eggs did Lucky lay last season?  
 \_\_\_\_\_
9. How many more eggs did Clucky lay than Lucky?  
 \_\_\_\_\_



10. 
$$\begin{array}{r} 3.3 \\ + 2.4 \\ \hline \end{array}$$
      
$$\begin{array}{r} 4.5 \\ + 5.6 \\ \hline \end{array}$$
      
$$\begin{array}{r} 7.2 \\ + 10.3 \\ \hline \end{array}$$