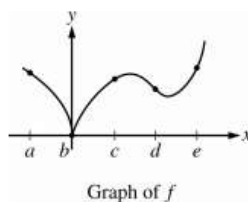


# Spring Break Practice Exam Calculator Allowed Multiple Choice



76. The graph of the function  $f$  is shown in the figure above. For which of the following values of  $x$  is  $f'(x)$  positive and increasing?

- (A)  $a$       (B)  $b$       (C)  $c$       (D)  $d$       (E)  $e$

77. Let  $f$  be a function that is continuous on the closed interval  $[2, 4]$  with  $f(2) = 10$  and  $f(4) = 20$ . Which of the following is guaranteed by the Intermediate Value Theorem?

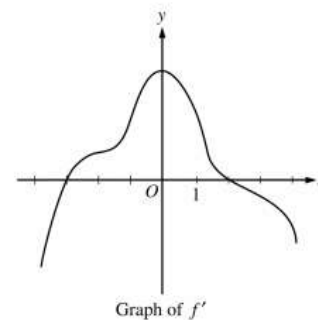
- (A)  $f(x) = 13$  has at least one solution in the open interval  $(2, 4)$ .  
 (B)  $f(3) = 15$   
 (C)  $f$  attains a maximum on the open interval  $(2, 4)$ .  
 (D)  $f'(x) = 5$  has at least one solution in the open interval  $(2, 4)$ .  
 (E)  $f'(x) > 0$  for all  $x$  in the open interval  $(2, 4)$ .

78. The graph of  $y = e^{\tan x} - 2$  crosses the  $x$ -axis at one point in the interval  $[0, 1]$ . What is the slope of the graph at this point?

- (A) 0.606      (B) 2      (C) 2.242      (D) 2.961      (E) 3.747

79. A particle moves along the  $x$ -axis. The velocity of the particle at time  $t$  is given by  $v(t)$ , and the acceleration of the particle at time  $t$  is given by  $a(t)$ . Which of the following gives the average velocity of the particle from time  $t = 0$  to time  $t = 8$ ?

- (A)  $\frac{a(8) - a(0)}{8}$   
 (B)  $\frac{1}{8} \int_0^8 v(t) dt$   
 (C)  $\frac{1}{8} \int_0^8 |v(t)| dt$   
 (D)  $\frac{1}{2} \int_0^8 v(t) dt$   
 (E)  $\frac{v(0) + v(8)}{2}$



80. The graph of  $f'$ , the derivative of the function  $f$ , is shown above. Which of the following statements must be true?

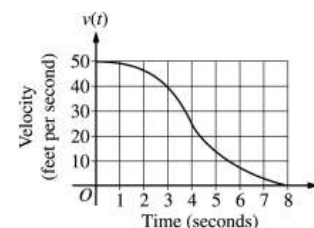
- I.  $f$  has a relative minimum at  $x = -3$ .  
 II. The graph of  $f$  has a point of inflection at  $x = -2$ .  
 III. The graph of  $f$  is concave down for  $0 < x < 4$ .  
 (A) I only      (B) II only      (C) III only      (D) I and II only      (E) I and III only

81. Water is pumped into a tank at a rate of  $r(t) = 30(1 - e^{-0.16t})$  gallons per minute, where  $t$  is the number of minutes since the pump was turned on. If the tank contained 800 gallons of water when the pump was turned on, how much water, to the nearest gallon, is in the tank after 20 minutes?

- (A) 380 gallons  
 (B) 420 gallons  
 (C) 829 gallons  
 (D) 1220 gallons  
 (E) 1376 gallons

82. If  $f'(x) = \sqrt{x^4 + 1} + x^3 - 3x$ , then  $f$  has a local maximum at  $x =$

- (A) -2.314      (B) -1.332      (C) 0.350      (D) 0.829      (E) 1.234

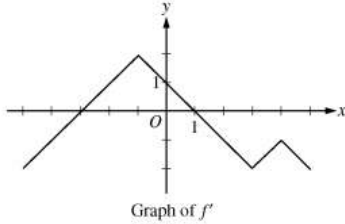


83. The graph above gives the velocity,  $v$ , in ft/sec, of a car for  $0 \leq t \leq 8$ , where  $t$  is the time in seconds. Of the following, which is the best estimate of the distance traveled by the car from  $t = 0$  until the car comes to a complete stop?

- (A) 21 ft      (B) 26 ft      (C) 180 ft      (D) 210 ft      (E) 260 ft

84. For  $-1.5 < x < 1.5$ , let  $f$  be a function with first derivative given by  $f'(x) = e^{(x^4 - 2x^2 + 1)} - 2$ . Which of the following are all intervals on which the graph of  $f$  is concave down?

- (A)  $(-0.418, 0.418)$  only  
 (B)  $(-1, 1)$   
 (C)  $(-1.354, -0.409)$  and  $(0.409, 1.354)$   
 (D)  $(-1.5, -1)$  and  $(0, 1)$   
 (E)  $(-1.5, -1.354)$ ,  $(-0.409, 0)$ , and  $(1.354, 1.5)$



85. The graph of  $f'$ , the derivative of  $f$ , is shown in the figure above. The function  $f$  has a local maximum at  $x =$
- (A) -3    (B) -1    (C) 1    (D) 3    (E) 4

86. If  $f'(x) > 0$  for all real numbers  $x$  and  $\int_4^7 f(t) dt = 0$ , which of the following could be a table of values for the function  $f$ ?

(A) 

$x$	$f(x)$
4	-4
5	-3
7	0

(B) 

$x$	$f(x)$
4	-4
5	-2
7	5

(C) 

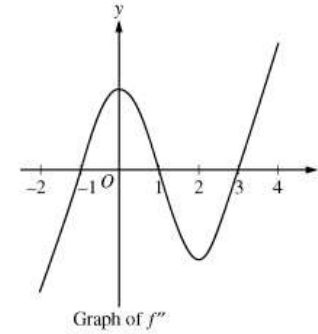
$x$	$f(x)$
4	-4
5	6
7	3

(D) 

$x$	$f(x)$
4	0
5	0
7	0

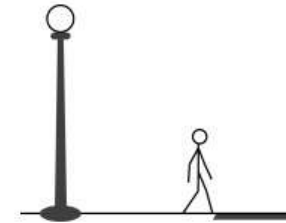
(E) 

$x$	$f(x)$
4	0
5	4
7	6



87. The graph of  $f''$ , the second derivative of  $f$ , is shown above for  $-2 \leq x \leq 4$ . What are all intervals on which the graph of the function  $f$  is concave down?

- (A)  $-1 < x < 1$   
 (B)  $0 < x < 2$   
 (C)  $1 < x < 3$  only  
 (D)  $-2 < x < -1$  only  
 (E)  $-2 < x < -1$  and  $1 < x < 3$



88. A person whose height is 6 feet is walking away from the base of a streetlight along a straight path at a rate of 4 feet per second. If the height of the streetlight is 15 feet, what is the rate at which the person's shadow is lengthening?

- (A) 1.5 ft/sec    (B) 2.667 ft/sec    (C) 3.75 ft/sec    (D) 6 ft/sec    (E) 10 ft/sec

89. A particle moves along a line so that its acceleration for  $t \geq 0$  is given by  $a(t) = \frac{t+3}{\sqrt{t^3+1}}$ . If the particle's velocity at  $t = 0$  is 5, what is the velocity of the particle at  $t = 3$ ?

- (A) 0.713    (B) 1.134    (C) 6.134    (D) 6.710    (E) 11.710

90. Let  $f$  be a function such that  $\int_6^{12} f(2x) dx = 10$ . Which of the following must be true?

- (A)  $\int_{12}^{24} f(t) dt = 5$
- (B)  $\int_{12}^{24} f(t) dt = 20$
- (C)  $\int_6^{12} f(t) dt = 5$
- (D)  $\int_6^{12} f(t) dt = 20$
- (E)  $\int_3^6 f(t) dt = 5$

$x$	-2	0	3	5	6
$f'(x)$	3	1	4	7	5

91. Let  $f$  be a polynomial function with values of  $f'(x)$  at selected values of  $x$  given in the table above. Which of the following must be true for  $-2 < x < 6$ ?

- (A) The graph of  $f$  is concave up.
- (B) The graph of  $f$  has at least two points of inflection.
- (C)  $f$  is increasing.
- (D)  $f$  has no critical points.
- (E)  $f$  has at least two relative extrema.

92. Let  $R$  be the region in the first quadrant bounded below by the graph of  $y = x^2$  and above by the graph of  $y = \sqrt{x}$ .  $R$  is the base of a solid whose cross sections perpendicular to the  $x$ -axis are squares. What is the volume of the solid?

- (A) 0.129      (B) 0.300      (C) 0.333      (D) 0.700      (E) 1.271